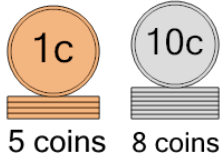




## Coin Math - Count Piles - Pennies and Dimes

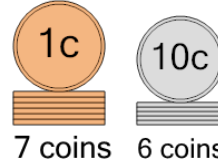


**1** What is the total value of these stacks of coins?



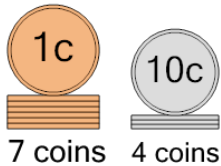
A	95 cents	B	110 cents
C	85 cents	D	100 cents
E	105 cents	F	84 cents

**2** What is the total value of these stacks of coins?



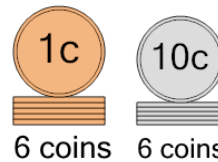
A	66 cents	B	77 cents
C	57 cents	D	67 cents
E	102 cents		

**3** What is the total value of these stacks of coins?



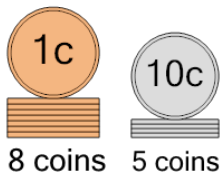
A	37 cents	B	53 cents
C	57 cents	D	49 cents
E	47 cents	F	52 cents

**4** What is the total value of these stacks of coins?



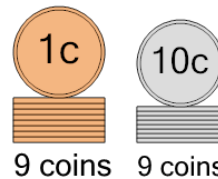
A	77 cents	B	66 cents
C	56 cents	D	67 cents
E	76 cents	F	68 cents

**5** What is the total value of these stacks of coins?



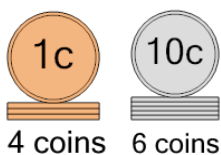
A	59 cents	B	57 cents
C	68 cents	D	78 cents
E	60 cents	F	58 cents

**6** What is the total value of these stacks of coins?



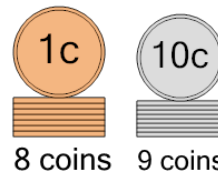
A	100 cents	B	119 cents
C	125 cents	D	98 cents
E	101 cents	F	99 cents

**7** What is the total value of these stacks of coins?



A	66 cents	B	64 cents
C	89 cents	D	54 cents
E	63 cents	F	74 cents

**8** What is the total value of these stacks of coins?



A	104 cents	B	124 cents
C	100 cents	D	97 cents
E	108 cents	F	98 cents