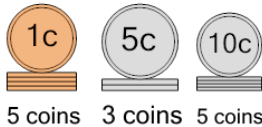
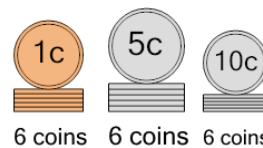
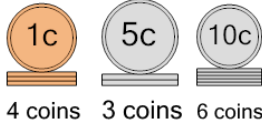
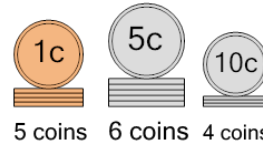
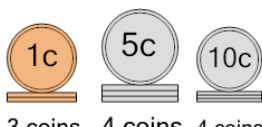
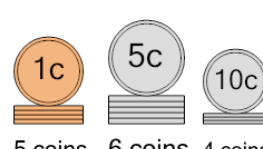
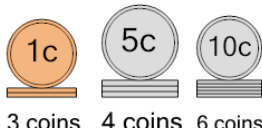
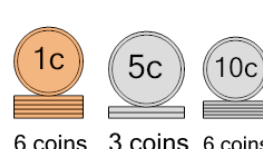


Coin Math - Count Piles - Pennies, Nickels, Dimes

1 What is the total value of these stacks of coins?  5 coins 3 coins 5 coins	A 100 cents	B 70 cents	2 What is the total value of these stacks of coins?  6 coins 6 coins 6 coins	A 97 cents	B 86 cents
	C 72 cents	D 69 cents		C 98 cents	D 101 cents
	E 65 cents	F 80 cents		E 96 cents	F 106 cents
3 What is the total value of these stacks of coins?  4 coins 3 coins 6 coins	A 114 cents	B 69 cents	4 What is the total value of these stacks of coins?  5 coins 6 coins 4 coins	A 85 cents	B 74 cents
	C 81 cents	D 78 cents		C 75 cents	D 77 cents
	E 79 cents	F 85 cents		E 95 cents	F 81 cents
5 What is the total value of these stacks of coins?  3 coins 4 coins 4 coins	A 63 cents	B 88 cents	6 What is the total value of these stacks of coins?  5 coins 6 coins 4 coins	A 76 cents	B 74 cents
	C 68 cents	D 83 cents		C 75 cents	D 65 cents
	E 64 cents	F 62 cents		E 85 cents	F 101 cents
7 What is the total value of these stacks of coins?  3 coins 4 coins 6 coins	A 82 cents	B 83 cents	8 What is the total value of these stacks of coins?  6 coins 3 coins 6 coins	A 71 cents	B 91 cents
	C 98 cents	D 73 cents		C 82 cents	D 81 cents
	E 88 cents	F 84 cents		E 83 cents	