
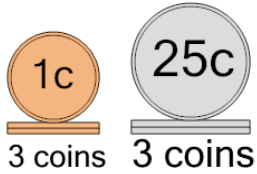




## Coin Math - Count Piles - Pennies and Quarters

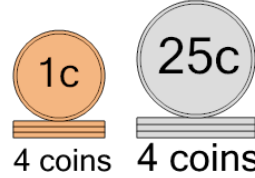


**1** What is the total value of these stacks of coins?



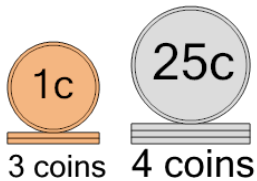
- |               |                |
|---------------|----------------|
| A<br>78 cents | B<br>128 cents |
| C<br>83 cents | D<br>77 cents  |
| E<br>79 cents | F<br>103 cents |

**2** What is the total value of these stacks of coins?



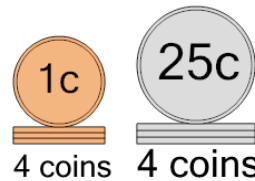
- |                |                |
|----------------|----------------|
| A<br>103 cents | B<br>109 cents |
| C<br>129 cents | D<br>154 cents |
| E<br>104 cents | F<br>79 cents  |

**3** What is the total value of these stacks of coins?



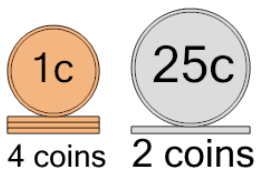
- |                |                |
|----------------|----------------|
| A<br>128 cents | B<br>103 cents |
| C<br>129 cents | D<br>102 cents |
| E<br>138 cents | F<br>109 cents |

**4** What is the total value of these stacks of coins?



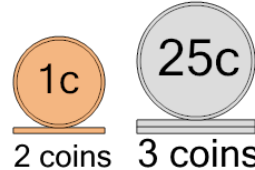
- |                |                |
|----------------|----------------|
| A<br>109 cents | B<br>103 cents |
| C<br>105 cents | D<br>79 cents  |
| E<br>129 cents | F<br>104 cents |

**5** What is the total value of these stacks of coins?



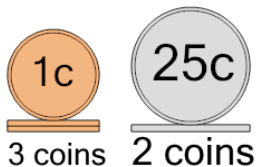
- |               |                |
|---------------|----------------|
| A<br>54 cents | B<br>104 cents |
| C<br>79 cents | D<br>53 cents  |
| E<br>59 cents |                |

**6** What is the total value of these stacks of coins?



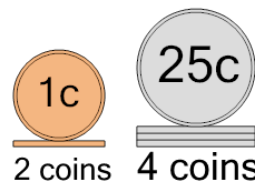
- |                |               |
|----------------|---------------|
| A<br>82 cents  | B<br>77 cents |
| C<br>52 cents  | D<br>87 cents |
| E<br>102 cents | F<br>79 cents |

**7** What is the total value of these stacks of coins?



- |               |                |
|---------------|----------------|
| A<br>52 cents | B<br>103 cents |
| C<br>54 cents | D<br>53 cents  |
| E<br>55 cents |                |

**8** What is the total value of these stacks of coins?



- |                |                |
|----------------|----------------|
| A<br>102 cents | B<br>77 cents  |
| C<br>127 cents | D<br>104 cents |
| E<br>112 cents |                |