
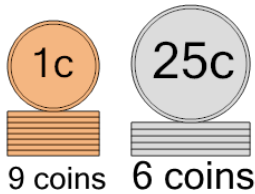




## Coin Math - Count Piles - Pennies and Quarters

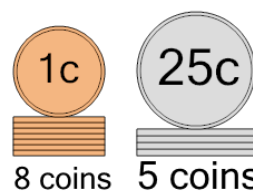


**1** What is the total value of these stacks of coins?



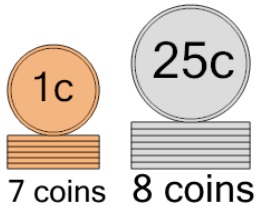
- |                |                |
|----------------|----------------|
| A<br>158 cents | B<br>161 cents |
| C<br>159 cents | D<br>160 cents |
| E<br>184 cents | F<br>164 cents |

**2** What is the total value of these stacks of coins?



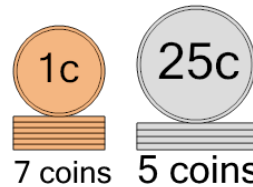
- |                |                |
|----------------|----------------|
| A<br>135 cents | B<br>133 cents |
| C<br>183 cents | D<br>138 cents |
| E<br>134 cents |                |

**3** What is the total value of these stacks of coins?



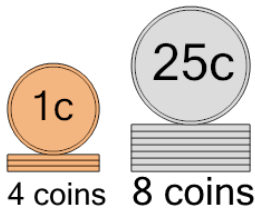
- |                |                |
|----------------|----------------|
| A<br>257 cents | B<br>208 cents |
| C<br>182 cents | D<br>207 cents |
| E<br>209 cents | F<br>232 cents |

**4** What is the total value of these stacks of coins?



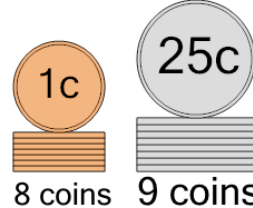
- |                |                |
|----------------|----------------|
| A<br>132 cents | B<br>131 cents |
| C<br>133 cents | D<br>157 cents |
| E<br>107 cents |                |

**5** What is the total value of these stacks of coins?



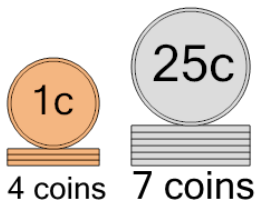
- |                |                |
|----------------|----------------|
| A<br>230 cents | B<br>254 cents |
| C<br>210 cents | D<br>205 cents |
| E<br>204 cents | F<br>229 cents |

**6** What is the total value of these stacks of coins?



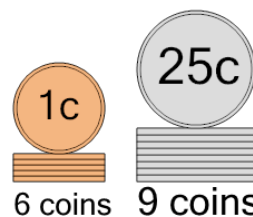
- |                |                |
|----------------|----------------|
| A<br>233 cents | B<br>208 cents |
| C<br>234 cents | D<br>232 cents |
| E<br>243 cents | F<br>238 cents |

**7** What is the total value of these stacks of coins?



- |                |                |
|----------------|----------------|
| A<br>179 cents | B<br>229 cents |
| C<br>154 cents | D<br>178 cents |
| E<br>181 cents | F<br>189 cents |

**8** What is the total value of these stacks of coins?



- |                |                |
|----------------|----------------|
| A<br>246 cents | B<br>206 cents |
| C<br>231 cents | D<br>256 cents |
| E<br>257 cents | F<br>230 cents |