




Coin Math - Count Piles - Pennies



1 What is the total value of this stack of coins?



A 13 cents	B 1 cents
C 4 cents	D 2 cents
E 37 cents	F 3 cents

2 What is the total value of this stack of coins?



A 3 cents	B 4 cents
C 18 cents	D 29 cents
E 2 cents	

3 What is the total value of this stack of coins?



A 4 cents	B 2 cents
C 5 cents	D 38 cents
E 3 cents	

4 What is the total value of this stack of coins?



A 2 cents	B 4 cents
C 3 cents	D 5 cents

5 What is the total value of this stack of coins?



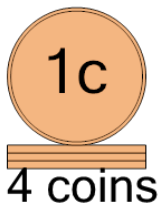
A 1 cents	B 2 cents
C 12 cents	

6 What is the total value of this stack of coins?



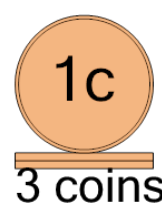
A 2 cents	B 12 cents
C 3 cents	D 1 cents
E 4 cents	

7 What is the total value of this stack of coins?



A 5 cents	B 6 cents
C 4 cents	D 3 cents

8 What is the total value of this stack of coins?



A 4 cents	B 38 cents
C 33 cents	D 3 cents
E 2 cents	