




## Coin Math - Count Piles - Pennies




**1** What is the total value of this stack of coins?




A	B
33 cents	18 cents
C	D
14 cents	38 cents
E	F
3 cents	2 cents

**2** What is the total value of this stack of coins?



A	B
8 cents	21 cents
C	D
5 cents	7 cents
E	
6 cents	

**3** What is the total value of this stack of coins?



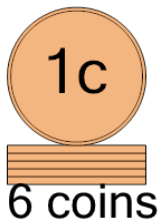
A	B
7 cents	5 cents
C	D
6 cents	8 cents

**4** What is the total value of this stack of coins?




A	B
7 cents	10 cents
C	D
4 cents	6 cents
E	
5 cents	

**5** What is the total value of this stack of coins?



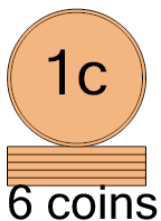
A	B
7 cents	36 cents
C	D
17 cents	8 cents
E	F
5 cents	6 cents

**6** What is the total value of this stack of coins?




A	B
10 cents	6 cents
C	D
4 cents	5 cents
E	
20 cents	

**7** What is the total value of this stack of coins?



A	B
12 cents	7 cents
C	D
21 cents	32 cents
E	F
31 cents	6 cents

**8** What is the total value of this stack of coins?



A	B
5 cents	16 cents
C	D
4 cents	7 cents
E	F
6 cents	40 cents