


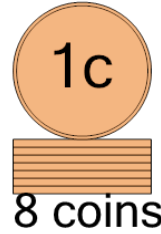


1 What is the total value of this stack of coins?



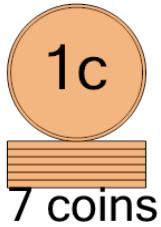
A	15 cents	B	40 cents
C	7 cents	D	6 cents
E	5 cents	F	4 cents

2 What is the total value of this stack of coins?



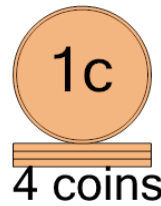
A	7 cents	B	10 cents
C	28 cents	D	38 cents
E	9 cents	F	8 cents

3 What is the total value of this stack of coins?



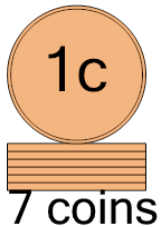
A	9 cents	B	6 cents
C	17 cents	D	8 cents
E	7 cents	F	13 cents

4 What is the total value of this stack of coins?



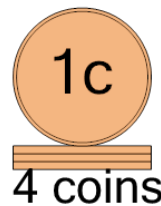
A	4 cents	B	5 cents
C	39 cents	D	3 cents
E	29 cents	F	6 cents

5 What is the total value of this stack of coins?



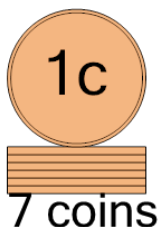
A	8 cents	B	17 cents
C	7 cents	D	6 cents
E	9 cents		

6 What is the total value of this stack of coins?



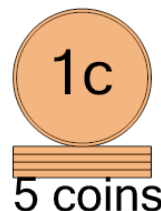
A	4 cents	B	5 cents
C	29 cents	D	3 cents
E	10 cents	F	6 cents

7 What is the total value of this stack of coins?



A	7 cents	B	37 cents
C	8 cents	D	13 cents
E	42 cents	F	6 cents

8 What is the total value of this stack of coins?



A	4 cents	B	40 cents
C	7 cents	D	5 cents
E	15 cents	F	35 cents