





## Coin Math - Count Piles - Quarters



**1** What is the total value of this stack of coins?



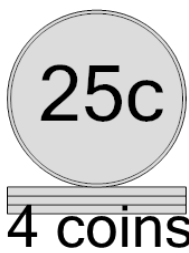
A	100 cents	B	135 cents
C	150 cents	D	175 cents
E	131 cents	F	125 cents

**2** What is the total value of this stack of coins?



A	150 cents	B	110 cents
C	75 cents	D	102 cents
E	130 cents	F	100 cents

**3** What is the total value of this stack of coins?



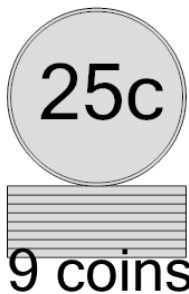
A	75 cents	B	105 cents
C	100 cents	D	150 cents
E	125 cents		

**4** What is the total value of this stack of coins?



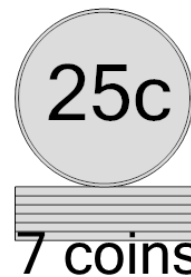
A	150 cents	B	125 cents
C	100 cents	D	175 cents
E	155 cents		

**5** What is the total value of this stack of coins?



A	275 cents	B	250 cents
C	200 cents	D	225 cents
E	227 cents		

**6** What is the total value of this stack of coins?




A	185 cents	B	175 cents
C	150 cents	D	190 cents
E	225 cents	F	200 cents

**7** What is the total value of this stack of coins?



A	200 cents	B	210 cents
C	250 cents	D	201 cents
E	225 cents	F	175 cents

**8** What is the total value of this stack of coins?



A	100 cents	B	125 cents
C	155 cents	D	135 cents
E	150 cents		