




## Coin Math - Identify Coins - Picture to Name




**1** What is the name of this coin?




|              |             |
|--------------|-------------|
| A<br>Quarter | B<br>Penny  |
| C<br>Dime    | D<br>Nickel |
|              |             |

**2** What is the name of this coin?




|              |            |
|--------------|------------|
| A<br>Nickel  | B<br>Dime  |
| C<br>Quarter | D<br>Penny |
|              |            |

**3** What is the name of this coin?




|              |             |
|--------------|-------------|
| A<br>Dime    | B<br>Nickel |
| C<br>Quarter | D<br>Penny  |
|              |             |

**4** What is the name of this coin?




|              |             |
|--------------|-------------|
| A<br>Quarter | B<br>Nickel |
| C<br>Penny   | D<br>Dime   |
|              |             |

**5** What is the name of this coin?




|              |             |
|--------------|-------------|
| A<br>Quarter | B<br>Nickel |
| C<br>Penny   | D<br>Dime   |
|              |             |

**6** What is the name of this coin?




|              |             |
|--------------|-------------|
| A<br>Quarter | B<br>Penny  |
| C<br>Dime    | D<br>Nickel |
|              |             |

**7** What is the name of this coin?



|              |             |
|--------------|-------------|
| A<br>Dime    | B<br>Nickel |
| C<br>Quarter | D<br>Penny  |
|              |             |

**8** What is the name of this coin?



|              |             |
|--------------|-------------|
| A<br>Dime    | B<br>Nickel |
| C<br>Quarter | D<br>Penny  |
|              |             |