


Counting in Groups - Picture and Count (Dice)

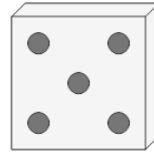
1 Each dice has 6 dots. How many dots would there be on 8 dice?



x 8

A	B	C
43	46	52
D	E	
51	48	

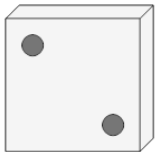
2 Each dice has 5 dots. How many dots would there be on 4 dice?



x 4

A	B	C
15	23	22
D		
20		

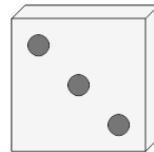
3 Each dice has 2 dots. How many dots would there be on 4 dice?



x 4

A	B	C
6	11	8
D		
12		


4 Each dice has 3 dots. How many dots would there be on 7 dice?



x 7

A	B	C
23	25	17
D	E	F
21	19	16

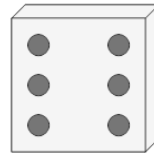
5 Each dice has 6 dots. How many dots would there be on 4 dice?



x 4

A	B	C
24	19	26
D	E	
22	21	

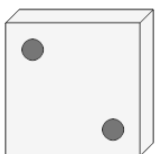
6 Each dice has 6 dots. How many dots would there be on 8 dice?



x 8

A	B	C
46	45	48
D	E	
51	44	

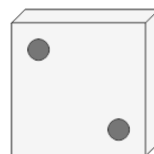
7 Each dice has 2 dots. How many dots would there be on 7 dice?



x 7

A	B	C
11	14	16
D	E	
9	12	

8 Each dice has 2 dots. How many dots would there be on 8 dice?



x 8

A	B	C
13	14	16