
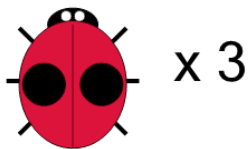




Counting in Groups - Picture and Count (Ladybug Spots)

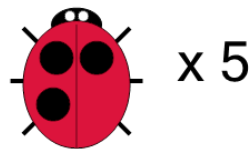


1 Each ladybug has 2 spots. How many spots would there be on 3 ladybugs?



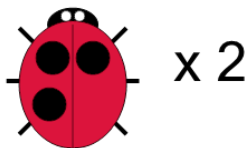
A	B	C
2	3	6
D		
10		

2 Each ladybug has 3 spots. How many spots would there be on 5 ladybugs?



A	B	C
13	11	15

3 Each ladybug has 3 spots. How many spots would there be on 2 ladybugs?



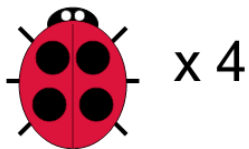
A	B	C
6	10	4
D		
1		

4 Each ladybug has 2 spots. How many spots would there be on 4 ladybugs?




A	B	C
4	5	8
D	E	F
10	3	6

5 Each ladybug has 4 spots. How many spots would there be on 4 ladybugs?



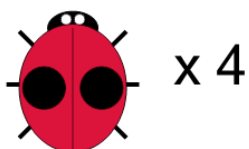
A	B	C
19	16	11
D	E	F
20	13	14

6 Each ladybug has 5 spots. How many spots would there be on 2 ladybugs?




A	B	C
7	14	12
D	E	
10	6	

7 Each ladybug has 2 spots. How many spots would there be on 4 ladybugs?



A	B	C
5	8	10
D	E	
12	4	

8 Each ladybug has 5 spots. How many spots would there be on 4 ladybugs?



A	B	C
15	24	23
D	E	
20	22	