
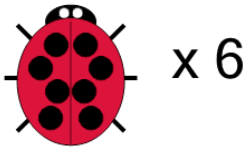




## Counting in Groups - Picture and Count (Ladybug Spots)

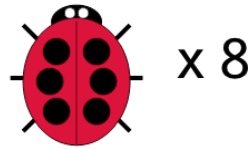


**1** Each ladybug has 8 spots. How many spots would there be on 6 ladybugs?



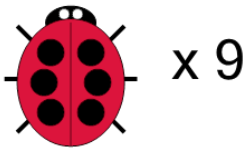
A	B	C
46	48	52
D	E	F
50	45	44

**2** Each ladybug has 6 spots. How many spots would there be on 8 ladybugs?




A	B	C
48	44	52
D	E	
46	51	

**3** Each ladybug has 6 spots. How many spots would there be on 9 ladybugs?



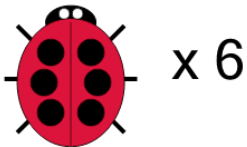
A	B	C
57	54	52
D		
56		

**4** Each ladybug has 6 spots. How many spots would there be on 8 ladybugs?



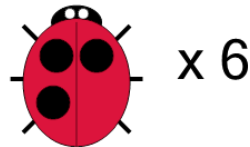
A	B	C
52	44	46
D	E	
51	48	

**5** Each ladybug has 6 spots. How many spots would there be on 6 ladybugs?



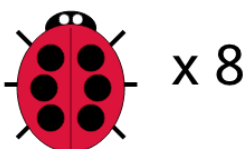
A	B	C
40	32	33
D	E	F
31	34	36

**6** Each ladybug has 3 spots. How many spots would there be on 6 ladybugs?



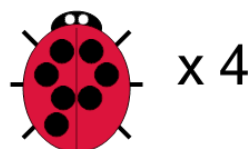
A	B	C
21	18	15
D	E	
20	13	

**7** Each ladybug has 6 spots. How many spots would there be on 8 ladybugs?



A	B	C
50	43	48
D		
45		

**8** Each ladybug has 7 spots. How many spots would there be on 4 ladybugs?



A	B	C
26	31	25
D	E	
28	23	