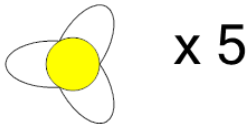




## Counting in Groups - Picture and Count (Flower Petals)

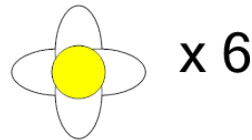


**1** Each flower has 3 petals. How many petals would there be on 5 flowers?



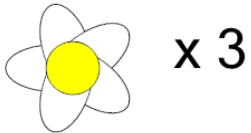
A	B	C
15	18	12
D		
13		

**2** Each flower has 4 petals. How many petals would there be on 6 flowers?



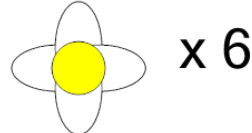
A	B	C
22	24	26
D		
20		

**3** Each flower has 5 petals. How many petals would there be on 3 flowers?



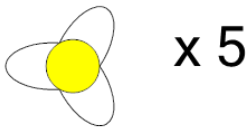
A	B	C
11	12	15
D	E	F
18	13	19

**4** Each flower has 4 petals. How many petals would there be on 6 flowers?



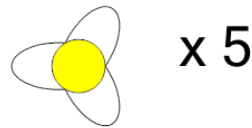
A	B	C
27	24	21
D		
19		

**5** Each flower has 3 petals. How many petals would there be on 5 flowers?



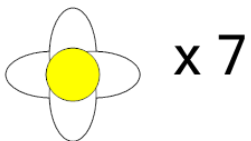
A	B	C
10	11	13
D		
15		

**6** Each flower has 3 petals. How many petals would there be on 5 flowers?



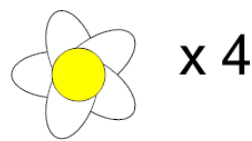
A	B	C
18	11	15
D		
10		

**7** Each flower has 4 petals. How many petals would there be on 7 flowers?



A	B	C
31	26	23
D	E	F
28	30	32

**8** Each flower has 5 petals. How many petals would there be on 4 flowers?



A	B	C
16	18	24
D	E	
15	20	