



## Counting in Groups - Picture and Count (Flower Petals)

**1** Each flower has 9 petals. How many petals would there be on 8 flowers?



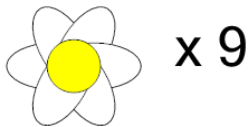
A	B	C
72	67	76
D	E	
70	75	

**2** Each flower has 7 petals. How many petals would there be on 6 flowers?



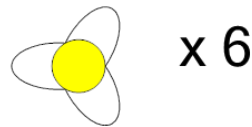
A	B	C
38	45	42
D		
37		

**3** Each flower has 6 petals. How many petals would there be on 9 flowers?




A	B	C
50	54	49
D	E	F
56	52	51

**4** Each flower has 3 petals. How many petals would there be on 6 flowers?



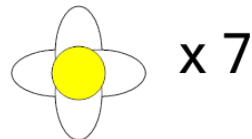
A	B	C
18	22	13
D	E	
14	21	

**5** Each flower has 7 petals. How many petals would there be on 9 flowers?



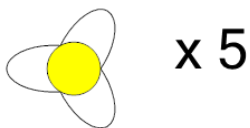
A	B	C
60	63	61
D		
66		

**6** Each flower has 4 petals. How many petals would there be on 7 flowers?



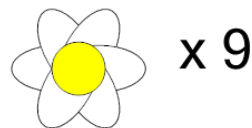
A	B	C
24	28	26

**7** Each flower has 3 petals. How many petals would there be on 5 flowers?



A	B	C
18	13	12
D	E	F
11	17	15

**8** Each flower has 6 petals. How many petals would there be on 9 flowers?



A	B	C
56	50	58
D		
54		