


Counting in Groups - Pictures and Skip Count (Specific Image)

1 Skip count by 4, to find how many legs in total on 2 chairs?




A	B	C
11	8	10
D	E	
12	5	

2 Skip count by 4, to find how many legs in total on 6 chairs?




A	B	C
24	21	27
D	E	F
19	28	26

3 Skip count by 4, to find how many legs in total on 7 cows?




A	B	C
28	30	32

4 Skip count by 4, to find how many legs in total on 6 cows?




A	B	C
24	28	20
D	E	F
27	21	19

5 Skip count by 4, to find how many legs in total on 5 cows?




A	B	C
20	16	22
D		
18		

6 Skip count by 4, to find how many legs in total on 7 chairs?




A	B	C
32	28	24
D	E	
26	31	

7 Skip count by 4, to find how many legs in total on 2 cows?



A	B	C
10	6	4
D	E	F
3	5	8

8 Skip count by 4, to find how many legs in total on 3 cows?



A	B	C
15	7	16
D	E	
9	12	