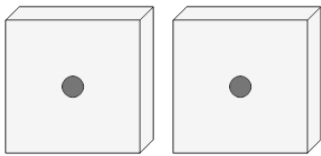




Counting in Groups - Pictures (Dice)

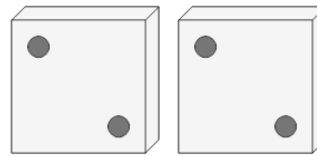


1 Each dice has 1 dots. How many dots in total?



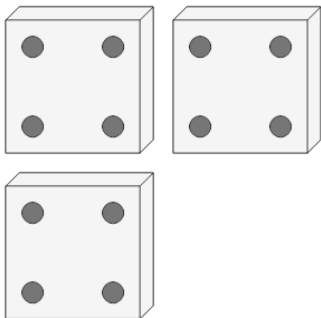
A	B	C
4	2	0

2 Each dice has 2 dots. How many dots in total?



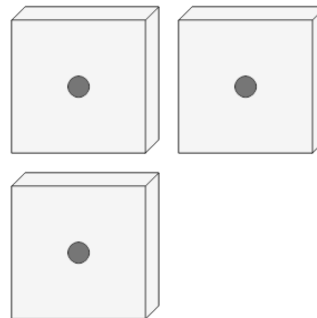
A	B	C
4	1	0

3 Each dice has 4 dots. How many dots in total?



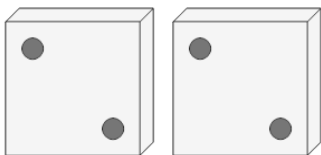
A	B	C
9	14	12
D	E	
8	10	

4 Each dice has 1 dots. How many dots in total?



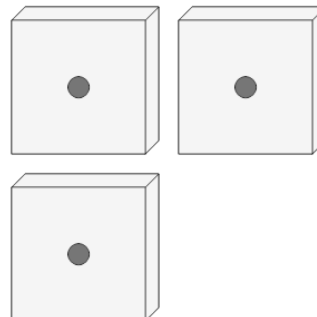
A	B	C
3	0	6
D		
7		

5 Each dice has 2 dots. How many dots in total?



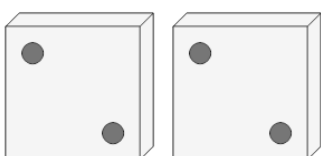
A	B	C
0	8	4
D		
1		

6 Each dice has 1 dots. How many dots in total?



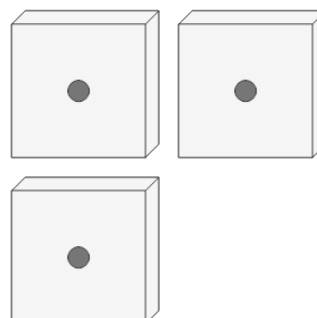
A	B	C
3	1	0
D		

7 Each dice has 2 dots. How many dots in total?



A	B	C
0	2	7
D		
4		

8 Each dice has 1 dots. How many dots in total?



A	B	C
5	6	0
D		
3		