
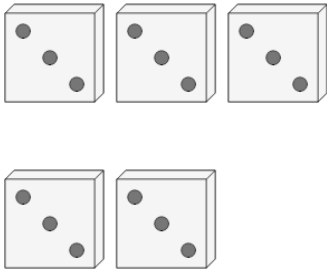




Counting in Groups - Pictures (Dice)

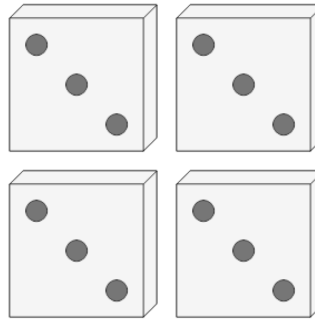


1 Each dice has 3 dots. How many dots in total?



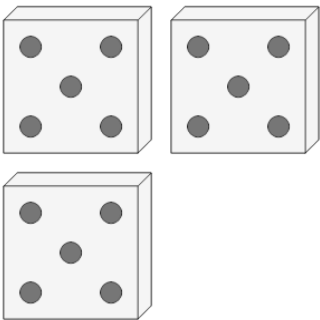
A	B	C
15	13	19
D	E	
11	18	

2 Each dice has 3 dots. How many dots in total?



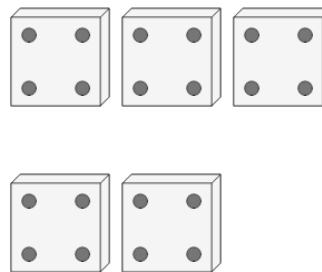
A	B	C
7	9	15
D	E	F
12	10	8

3 Each dice has 5 dots. How many dots in total?



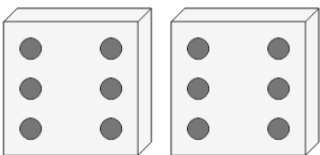
A	B	C
10	17	15
D	E	F
13	11	18

4 Each dice has 4 dots. How many dots in total?



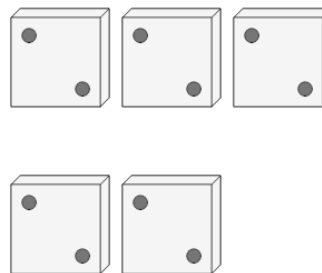
A	B	C
20	22	17
D	E	F
18	16	24

5 Each dice has 6 dots. How many dots in total?




A	B	C
8	7	9
D	E	
15	12	

6 Each dice has 2 dots. How many dots in total?



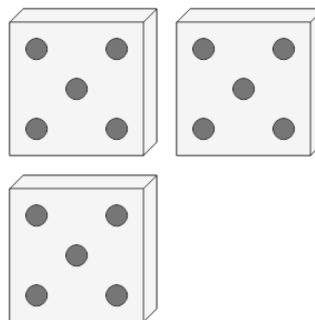
A	B	C
10	14	12
D		
6		

7 Each dice has 6 dots. How many dots in total?



A	B
28	24

8 Each dice has 5 dots. How many dots in total?



A	B	C
18	12	15
D	E	F
13	10	17