




Counting in Groups - Pictures (Specific Image)




1 Each bike has 2 wheels. How many wheels in total?



A	B	C
18	9	11
D	E	
14	17	

2 Each motorbike has 2 wheels. How many wheels in total?




A	B	C
8	14	12
D	E	
7	16	

3 Each bike has 2 wheels. How many wheels in total?




A	B	C
19	13	12
D	E	
16	11	

4 Each motorbike has 2 wheels. How many wheels in total?




A	B	C
17	10	14
D	E	
12	9	

5 Each motorbike has 2 wheels. How many wheels in total?



A	B	C
10	5	13
D	E	
6	7	

6 Each bike has 2 wheels. How many wheels in total?



A	B	C
6	10	2

7 Each bike has 2 wheels. How many wheels in total?



A	B	C
10	12	5
D	E	
14	6	

8 Each bike has 2 wheels. How many wheels in total?



A	B	C
2	6	4
D	E	F
7	1	0