




Counting in Groups - Pictures (Specific Image)




1 Each chair has 4 legs. How many legs in total?




A	B	C
28	32	27
D	E	F
34	29	30

2 Each chair has 4 legs. How many legs in total?




A	B	C
24	26	20
D		
19		

3 Each chair has 4 legs. How many legs in total?




A	B	C
22	20	24
D		
17		

4 Each cow has 4 legs. How many legs in total?



A	B	C
15	23	20
D	E	F
24	22	17

5 Each cow has 4 legs. How many legs in total?



A	B	C
34	33	36
D		
31		

6 Each chair has 4 legs. How many legs in total?




A	B	C
33	31	36
D	E	
32	39	

7 Each chair has 4 legs. How many legs in total?



A	B	C
12	14	13
D	E	F
19	16	20

8 Each cow has 4 legs. How many legs in total?



A	B	C
26	28	32
D	E	F
25	23	24