




Counting in Groups - Pictures (Specific Image)




1 Each hand has 5 fingers. How many fingers in total?




A	B	C
14	8	12
D	E	F
7	6	10

2 Each hand has 5 fingers. How many fingers in total?




A	B	C
15	18	20
D	E	
16	23	

3 Each starfish has 5 arms. How many arms in total?



A	B	C
24	20	17
D		
18		

4 Each hand has 5 fingers. How many fingers in total?



A	B	C
21	25	29
D	E	
23	20	

5 Each starfish has 5 arms. How many arms in total?



A	B	C
38	42	40
D	E	F
36	35	43

6 Each starfish has 5 arms. How many arms in total?



A	B	C
38	35	31
D		
39		

7 Each starfish has 5 arms. How many arms in total?



A	B	C
15	11	12
D		
18		

8 Each starfish has 5 arms. How many arms in total?



A	B	C
27	29	25
D		
23		