





Counting in Groups - Pictures (Specific Image)

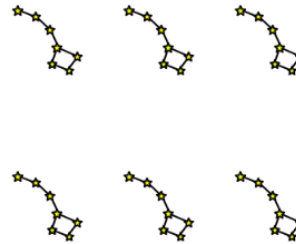


1 Each box has 7 crayons. How many crayons in total?



A	B	C
54	51	56
D		
58		

2 Each constellation has 7 stars. How many stars in total?



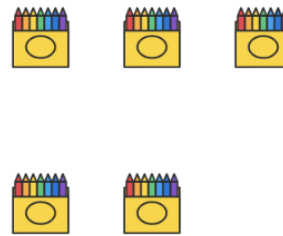
A	B	C
40	45	42
D	E	
46	37	

3 Each constellation has 7 stars. How many stars in total?



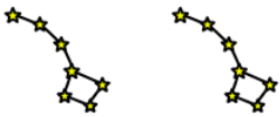
A	B	C
31	32	26
D		
28		

4 Each box has 7 crayons. How many crayons in total?



A	B	C
39	33	35
D		
32		

5 Each constellation has 7 stars. How many stars in total?



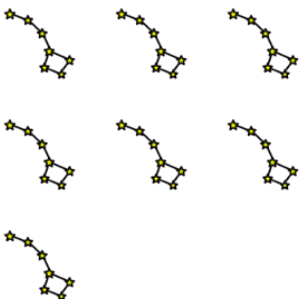
A	B	C
10	14	16
D		
12		

6 Each box has 7 crayons. How many crayons in total?

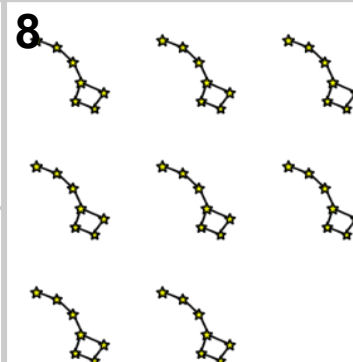


A	B	C
14	12	16
D		
10		

7 Each constellation has 7 stars. How many stars in total?



A	B	C
44	51	49
D		
52		



Each constellation has 7 stars. How many stars in total?

A	B
54	56