




Counting in Groups - Pictures (Specific Image)



1 Each octopus has 8 legs. How many legs in total?




A	B	C
67	72	74
D	E	
70	69	

2 Each octopus has 8 legs. How many legs in total?



A	B	C
19	14	20
D	E	F
16	13	18

3 Each spider has 8 legs. How many legs in total?




A	B	C
66	64	60
D	E	F
62	59	68

4 Each spider has 8 legs. How many legs in total?




A	B	C
72	70	75
D		
67		

5 Each octopus has 8 legs. How many legs in total?




A	B	C
53	51	54
D	E	F
52	60	56

6 Each spider has 8 legs. How many legs in total?




A	B	C
29	36	32
D	E	
34	28	

7 Each octopus has 8 legs. How many legs in total?



A	B	C
19	27	24
D	E	F
22	20	28

8 Each octopus has 8 legs. How many legs in total?



A	B	C
29	32	28
D	E	F
36	27	35