





Counting in Groups - Pictures (Ladybug Spots)




1 Each ladybug has 5 spots.
How many spots in total?




A	B	C
23	29	21
D	E	F
20	25	28

2 Each ladybug has 4 spots.
How many spots in total?



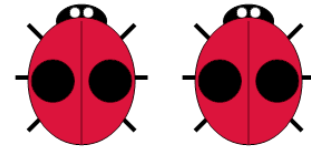
A	B	C
24	18	17
D	E	
23	20	

3 Each ladybug has 2 spots.
How many spots in total?




A	B	C
5	3	6
D	E	
8	4	

4 Each ladybug has 2 spots.
How many spots in total?




A	B	C
0	1	7
D	E	
2	4	

5 Each ladybug has 4 spots.
How many spots in total?




A	B	C
16	18	13
D	E	
14	20	

6 Each ladybug has 4 spots.
How many spots in total?




A	B	C
14	16	20
D	E	F
11	19	13

7 Each ladybug has 3 spots.
How many spots in total?



A	B	C
10	9	7
D		
12		

8 Each ladybug has 4 spots.
How many spots in total?



A	B	C
18	19	14
D	E	
20	16	