





## Counting in Groups - Pictures (Ladybug Spots)




**1** Each ladybug has 6 spots.  
How many spots in total?




A	B	C
33	34	36

**2** Each ladybug has 2 spots.  
How many spots in total?



A	B	C
8	10	4

**3** Each ladybug has 6 spots.  
How many spots in total?




A	B	C
31	38	32

**4** Each ladybug has 8 spots.  
How many spots in total?




A	B	C
45	48	52

**5** Each ladybug has 8 spots.  
How many spots in total?



A	B	C
36	40	44

**6**




Each ladybug has 3 spots. How many spots in total?

D	E	F
33	36	39


A	B
17	15

**7** Each ladybug has 6 spots.  
How many spots in total?



A	B	C
25	30	26

**8** Each ladybug has 7 spots.  
How many spots in total?



A	B	C
25	30	28

D	E
27	32

D	E
31	24