
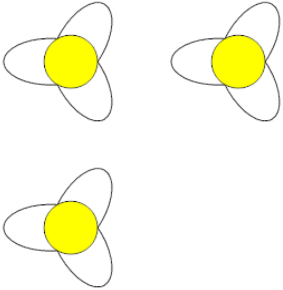




Counting in Groups - Pictures (Flower Petals)

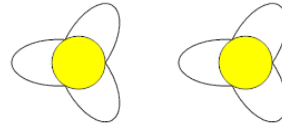


1 Each flower has 3 petals. How many petals in total?



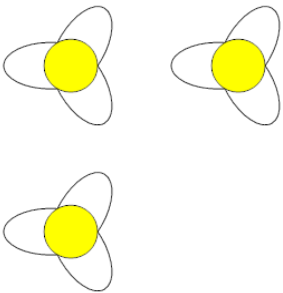
A	B	C
5	4	12
D	E	
9	11	

2 Each flower has 3 petals. How many petals in total?



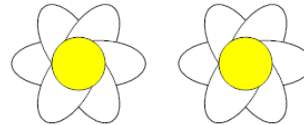
A	B	C
1	6	8

3 Each flower has 3 petals. How many petals in total?



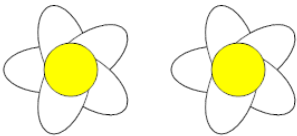
A	B	C
11	6	9
D	E	F
5	12	7

4 Each flower has 6 petals. How many petals in total?



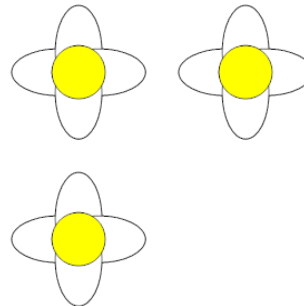
A	B	C
15	12	14
D		
10		

5 Each flower has 5 petals. How many petals in total?



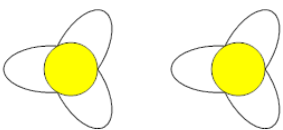
A	B	C
13	5	6
D	E	F
14	7	10

6 Each flower has 4 petals. How many petals in total?



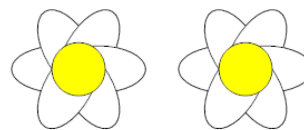
A	B	C
7	8	12
D	E	F
10	16	15

7 Each flower has 3 petals. How many petals in total?



A	B	C
10	6	3
D	E	
1	2	

8 Each flower has 6 petals. How many petals in total?



A	B	C
14	16	15
D	E	
12	7	