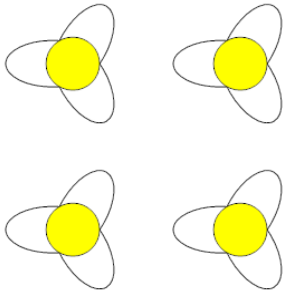




## Counting in Groups - Pictures (Flower Petals)

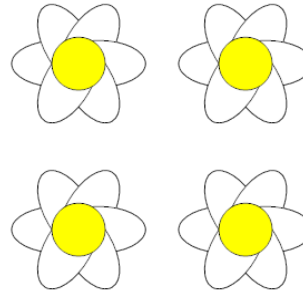


**1** Each flower has 3 petals. How many petals in total?



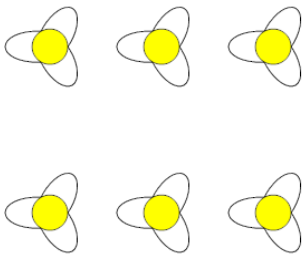
A	B	C
14	12	7
D	E	
16	10	

**2** Each flower has 6 petals. How many petals in total?




A	B	C
28	26	22
D	E	F
24	19	21

**3** Each flower has 3 petals. How many petals in total?



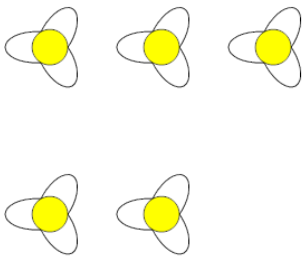
A	B	C
20	15	13
D	E	
21	18	

**4** Each flower has 7 petals. How many petals in total?




A	B	C
30	31	28

**5** Each flower has 3 petals. How many petals in total?



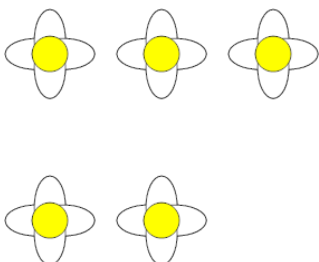
A	B	C
13	19	12
D	E	F
15	10	11

**6** Each flower has 7 petals. How many petals in total?




A	B	C
31	38	35

**7** Each flower has 4 petals. How many petals in total?



A	B	C
16	17	20
D		
23		

**8** Each flower has 9 petals. How many petals in total?



A	B	C
57	52	50
D	E	F
56	54	58