



Counting in Groups - Total to Picture and Count (Specific Image)

1

20 arms

Each starfish has 5 arms. How many starfishes would have this many total arms?



A



B



2

10 arms

Each starfish has 5 arms. How many starfishes would have this many total arms?



A



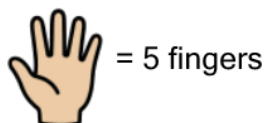
B



3

40 fingers

Each hand has 5 fingers. How many hands would have this many total fingers?



A



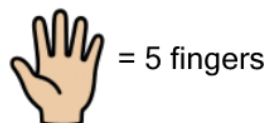
B



4

30 fingers

Each hand has 5 fingers. How many hands would have this many total fingers?



A



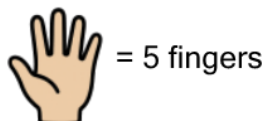
B



5

15 fingers

Each hand has 5 fingers. How many hands would have this many total fingers?



A



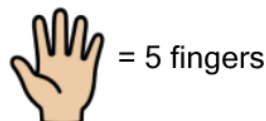
B



6

25 fingers

Each hand has 5 fingers. How many hands would have this many total fingers?



A



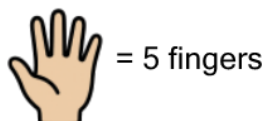
B



7

10 fingers

Each hand has 5 fingers. How many hands would have this many total fingers?



A



B



8

40 arms

Each starfish has 5 arms. How many starfishes would have this many total arms?



A



B

