

Counting in Groups - Total to Picture Groups (Specific Image)


1

35 arms

Each starfish has 5 arms. How many starfishes would have this many total arms?



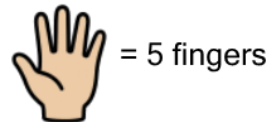
= 5 arms



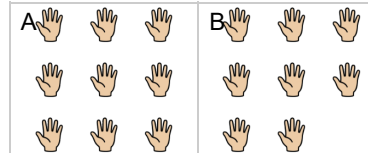
2

40 fingers

Each hand has 5 fingers. How many hands would have this many total fingers?



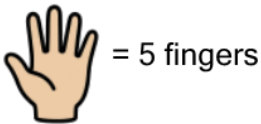
= 5 fingers



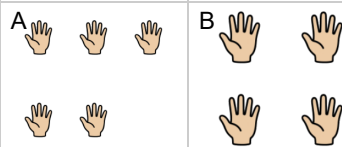
3

25 fingers

Each hand has 5 fingers. How many hands would have this many total fingers?



= 5 fingers




4

25 arms

Each starfish has 5 arms. How many starfishes would have this many total arms?



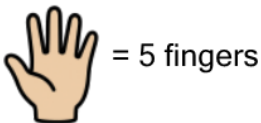
= 5 arms



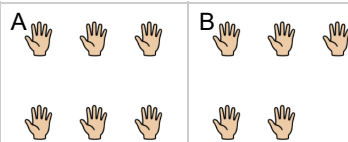
5

30 fingers

Each hand has 5 fingers. How many hands would have this many total fingers?



= 5 fingers




6

15 arms

Each starfish has 5 arms. How many starfishes would have this many total arms?



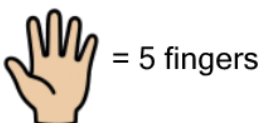
= 5 arms



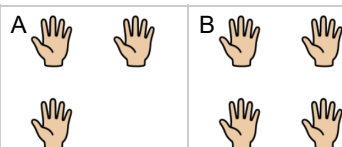
7

20 fingers

Each hand has 5 fingers. How many hands would have this many total fingers?



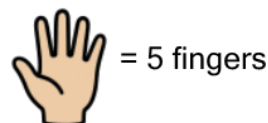
= 5 fingers



8

35 fingers

Each hand has 5 fingers. How many hands would have this many total fingers?



= 5 fingers

