



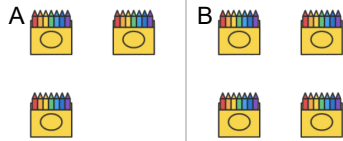
Counting in Groups - Total to Picture Groups (Specific Image)



1

28 crayons

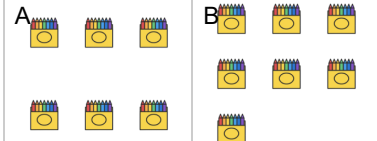
Each box has 7 crayons. How many boxes would have this many total crayons?



2

49 crayons

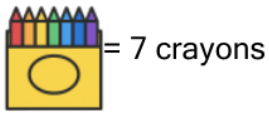
Each box has 7 crayons. How many boxes would have this many total crayons?



3

42 crayons

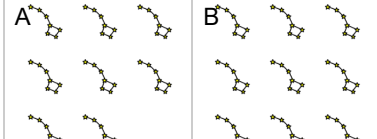
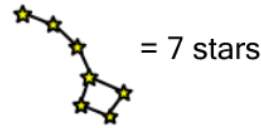
Each box has 7 crayons. How many boxes would have this many total crayons?



4

63 stars

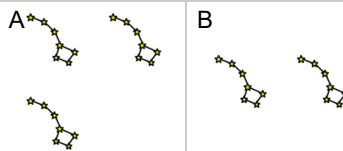
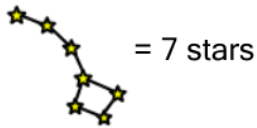
Each constellation has 7 stars. How many constellations would have this many total stars?



5

14 stars

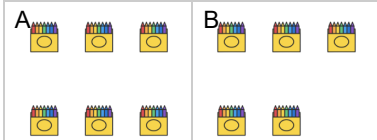
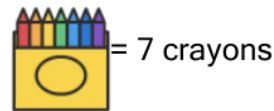
Each constellation has 7 stars. How many constellations would have this many total stars?



6

35 crayons

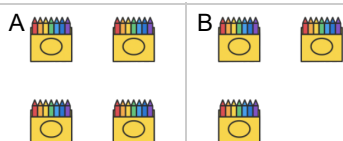
Each box has 7 crayons. How many boxes would have this many total crayons?



7

21 crayons

Each box has 7 crayons. How many boxes would have this many total crayons?



8

56 crayons

Each box has 7 crayons. How many boxes would have this many total crayons?

