




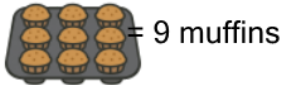
Counting in Groups - Total to Picture Groups (Specific Image)



1

63 muffins

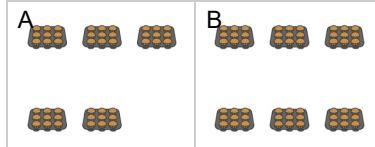
Each tray has 9 muffins. How many trays would have this many total muffins?



2

54 muffins

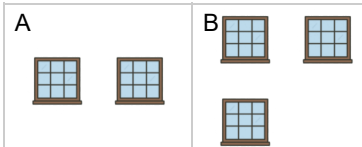
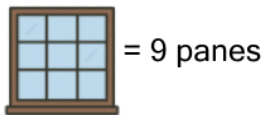
Each tray has 9 muffins. How many trays would have this many total muffins?



3

18 panes

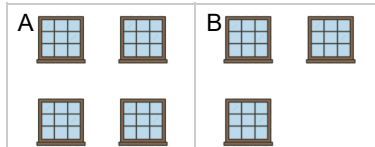
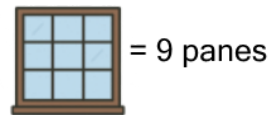
Each window has 9 panes. How many windows would have this many total panes?



4

27 panes

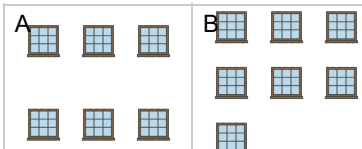
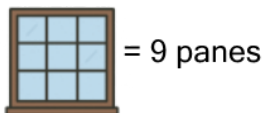
Each window has 9 panes. How many windows would have this many total panes?



5

54 panes

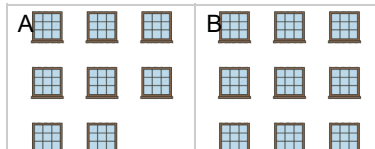
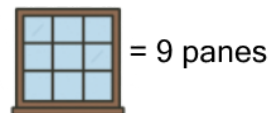
Each window has 9 panes. How many windows would have this many total panes?



6

72 panes

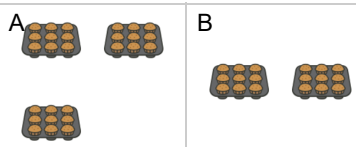
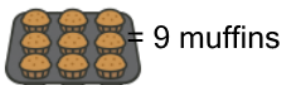
Each window has 9 panes. How many windows would have this many total panes?



7

27 muffins

Each tray has 9 muffins. How many trays would have this many total muffins?



8

72 muffins

Each tray has 9 muffins. How many trays would have this many total muffins?

