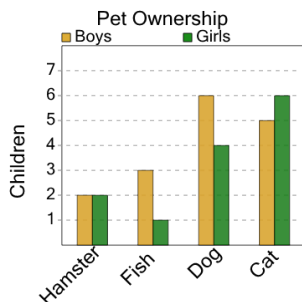




Graphing - Bar Graph (Double) - Difference of Two

1

How many more girls have a cat than boys have a fish as a pet?



A

5

B

2

C

0

D

1

E

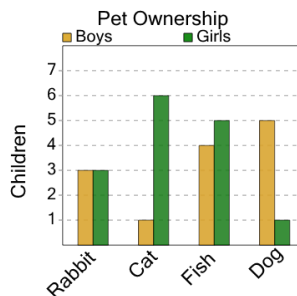
4

F

3

2

How many more girls have a rabbit than boys have a cat as a pet?



A

4

B

2

C

8

D

6

E

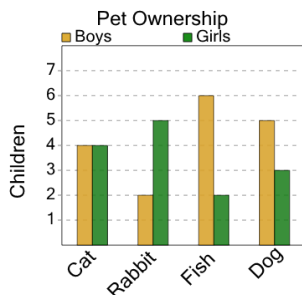
1

F

5

3

How many more girls have a rabbit than boys have a cat as a pet?



A

1

B

0

C

3

D

6

E

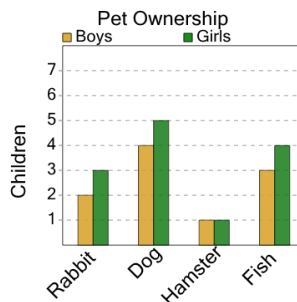
2

F

7

4

How many more girls have a dog than boys have a rabbit as a pet?



A

5

B

10

C

2

D

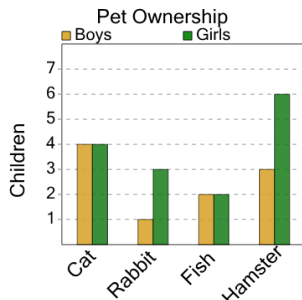
1

E

3

5

How many more girls have a rabbit than boys have a fish as a pet?



A

7

B

2

C

3

D

1

E

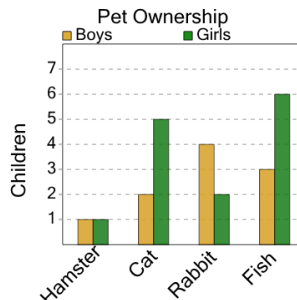
0

F

5

6

How many more girls have a fish than boys have a cat as a pet?



A

8

B

3

C

10

D

6

E

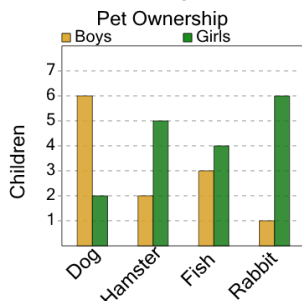
4

F

1

7

How many more boys have a fish than girls have a dog as a pet?



A

6

B

1

C

2

D

5

E

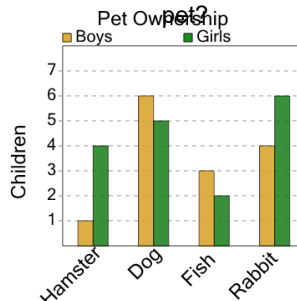
7

F

4

8

How many more boys have a dog than girls have a hamster as a pet?



A

3

B

0

C

9

D

7

E

1

F

2