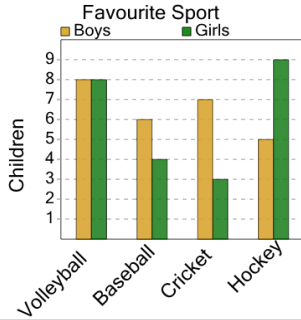


Graphing - Bar Graph (Double) - Maximum of Series

1

What sport do the LARGEST number of boys like?



A
Volleyball

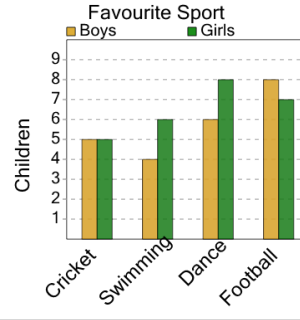
B
Baseball

C
Hockey

D
Cricket

2

What sport do the LARGEST number of girls like?



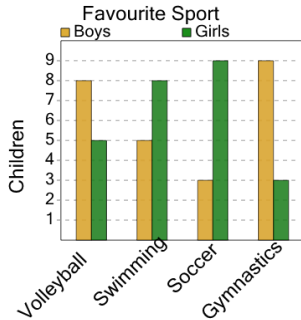
A
Dance

B
Cricket

C
Swimming

3

What sport do the LARGEST number of boys like?



A
Volleyball

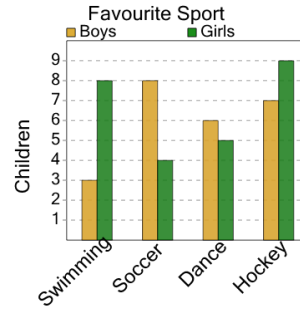
B
Swimming

C
Gymnastics

D
Soccer

4

What sport do the LARGEST number of girls like?



A
Hockey

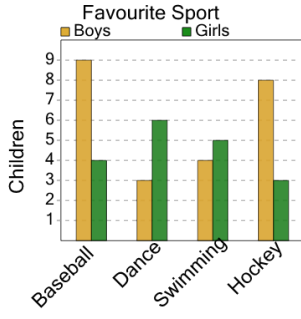
B
Dance

C
Swimming

D
Soccer

5

What sport do the LARGEST number of girls like?



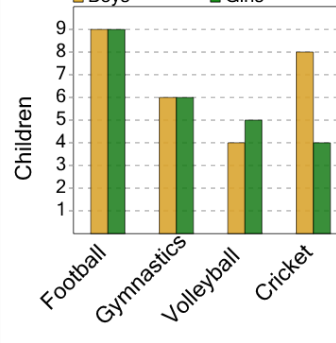
A
Swimming

B
Baseball

C
Dance

6

Favourite Sport



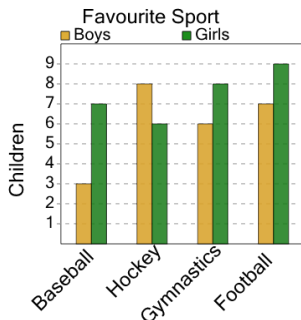
What sport do the LARGEST number of boys like?

A
Football

B
Cricket

7

What sport do the LARGEST number of girls like?



A
Football

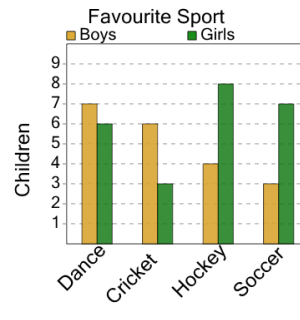
B
Hockey

C
Gymnastics

D
Baseball

8

What sport do the LARGEST number of boys like?



A
Dance

B
Hockey

C
Soccer

D
Cricket