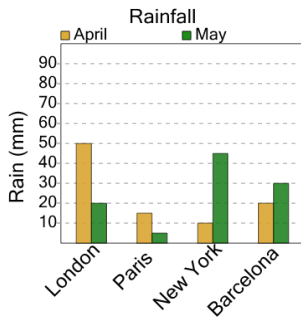


Graphing - Bar Graph (Double) - Maximum of Series

1

What city had the LARGEST amount of rain in April?



A
Paris

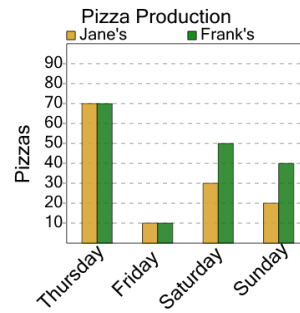
B
Barcelona

C
London

D
New York

2

On what day were the MOST pizzas made at Frank's?



A
Saturday

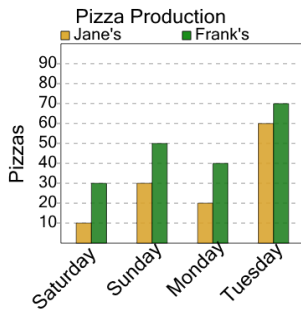
B
Thursday

C
Friday

D
Sunday

3

On what day were the MOST pizzas made at Jane's?



A
Saturday

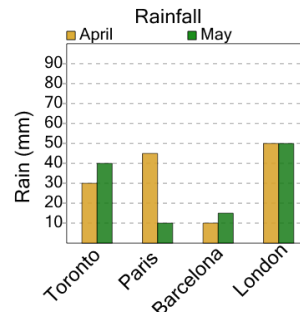
B
Sunday

C
Monday

D
Tuesday

4

What city had the LARGEST amount of rain in April?



A
London

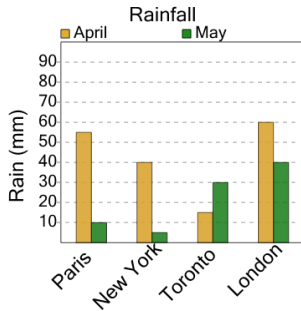
B
Toronto

C
Barcelona

D
Paris

5

What city had the LARGEST amount of rain in April?



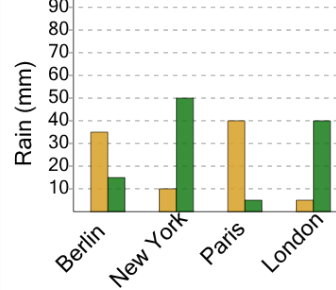
A
London

B
New York

C
Paris

6

Rainfall



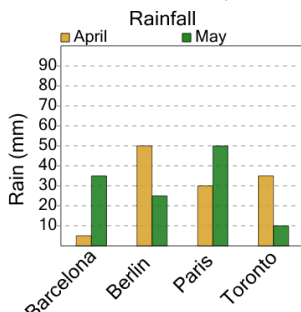
What city had the LARGEST amount of rain in April?

A
Paris

B
Berlin

7

What city had the LARGEST amount of rain in May?



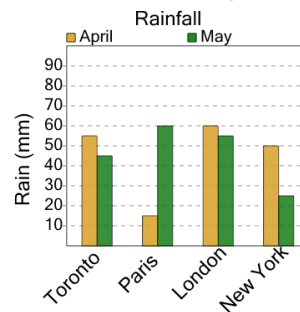
A
Paris

B
Barcelona

C
Berlin

8

What city had the LARGEST amount of rain in May?



A
Toronto

B
New York

C
Paris

D
London