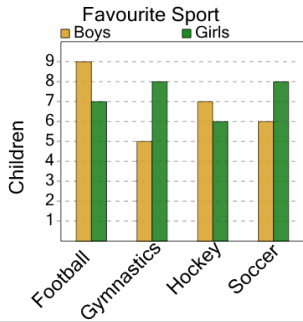


1

What sport do the LARGEST number of either boys or girls like?



A

Girls / Soccer

B

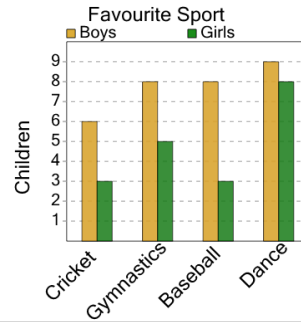
Girls / Hockey

C

Boys / Football

2

What sport do the LARGEST number of either boys or girls like?



A

Girls / Baseball

B

Boys / Cricket

C

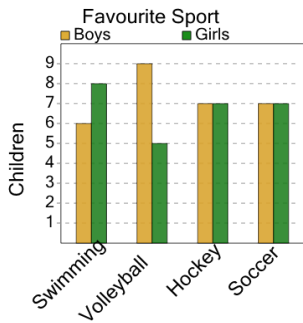
Boys / Gymnastics

D

Boys / Dance

3

What sport do the LARGEST number of either boys or girls like?



A

Girls / Soccer

B

Boys / Swimming

C

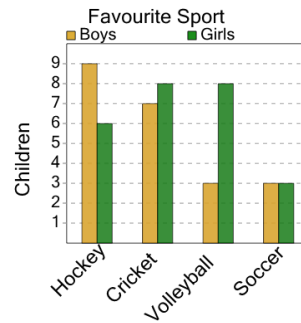
Boys / Volleyball

D

Girls / Hockey

4

What sport do the LARGEST number of either boys or girls like?



A

Girls / Cricket

B

Boys / Hockey

C

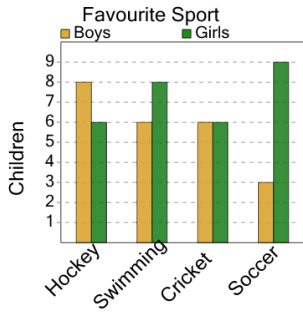
Boys / Soccer

D

Boys / Volleyball

5

What sport do the LARGEST number of either boys or girls like?



A

Boys / Swimming

B

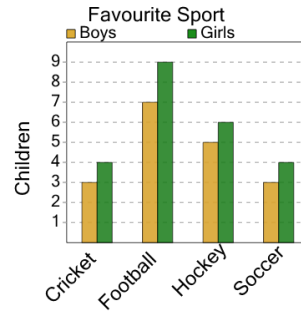
Girls / Soccer

C

Girls / Hockey

6

What sport do the LARGEST number of either boys or girls like?



A

Girls / Hockey

B

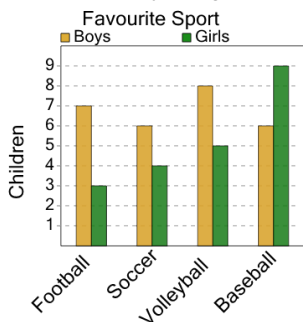
Boys / Soccer

C

Girls / Football

7

What sport do the LARGEST number of either boys or girls like?



A

Girls / Baseball

B

Girls / Football

C

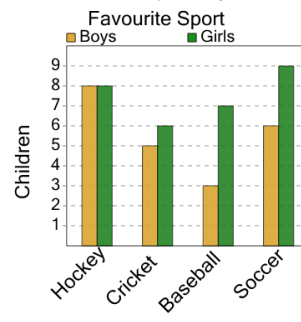
Boys / Volleyball

D

Girls / Soccer

8

What sport do the LARGEST number of either boys or girls like?



A

Girls / Cricket

B

Girls / Baseball

C

Girls / Soccer

D

Boys / Hockey