


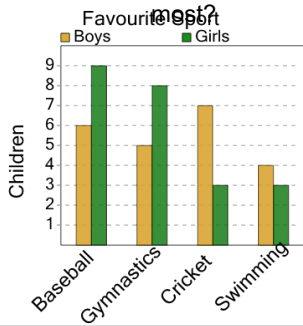


Graphing - Bar Graph (Double) - Minimum Overall



1

What sport do the SMALLEST number of either boys or girls like



A

Boys / Baseball

B

Girls / Cricket

C

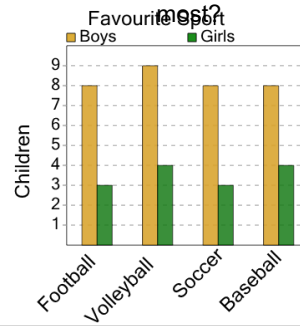
Boys / Swimming

D

Boys / Gymnastics

2

What sport do the SMALLEST number of either boys or girls like



A

Girls / Football

B

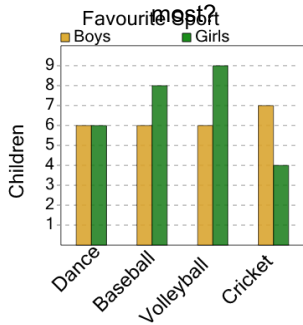
Boys / Baseball

C

Boys / Volleyball

3

What sport do the SMALLEST number of either boys or girls like



A

Girls / Baseball

B

Girls / Volleyball

C

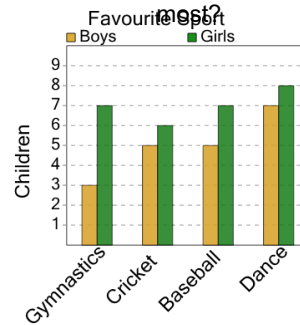
Girls / Dance

D

Girls / Cricket

4

What sport do the SMALLEST number of either boys or girls like



A

Boys / Gymnastics

B

Girls / Cricket

C

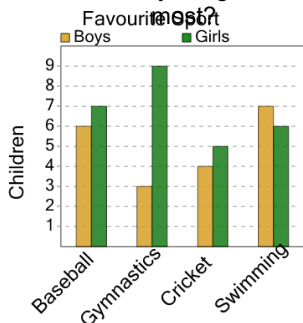
Girls / Dance

D

Girls / Baseball

5

What sport do the SMALLEST number of either boys or girls like



A

Boys / Gymnastics

B

Girls / Swimming

C

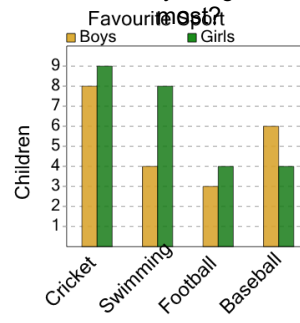
Boys / Baseball

D

Girls / Cricket

6

What sport do the SMALLEST number of either boys or girls like



A

Boys / Football

B

Girls / Swimming

C

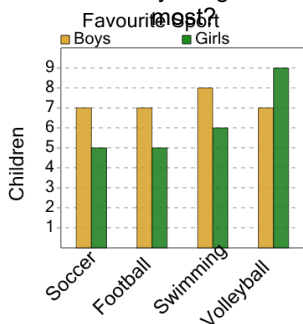
Girls / Baseball

D

Boys / Cricket

7

What sport do the SMALLEST number of either boys or girls like



A

Girls / Football

B

Girls / Soccer

C

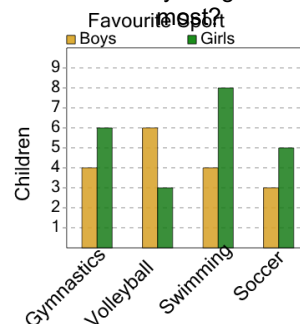
Girls / Volleyball

D

Girls / Swimming

8

What sport do the SMALLEST number of either boys or girls like



A

Girls / Swimming

B

Boys / Soccer

C

Boys / Volleyball