
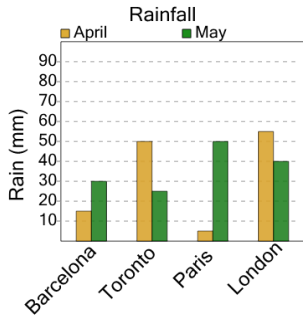




## Graphing - Bar Graph (Double) - Minimum Overall



**1** What city had the LEAST amount of rain in a month?



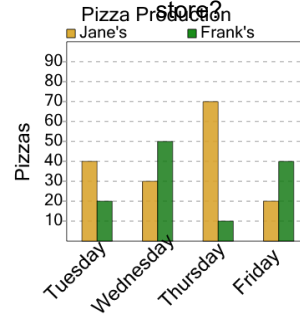
A April / London

B April / Paris

C April / Barcelona

D May / Toronto

**2** On what day and store were the FEWEST pizzas made at any store?



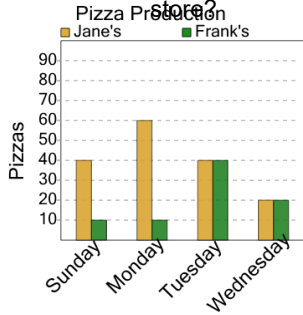
A Frank's / Wednesday

B Jane's / Friday

C Frank's / Thursday

D Jane's / Tuesday

**3** On what day and store were the FEWEST pizzas made at any store?

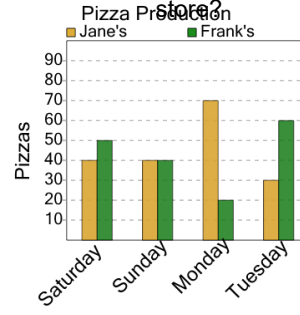


A Frank's / Monday

B Frank's / Wednesday

C Frank's / Sunday

**4** On what day and store were the FEWEST pizzas made at any store?



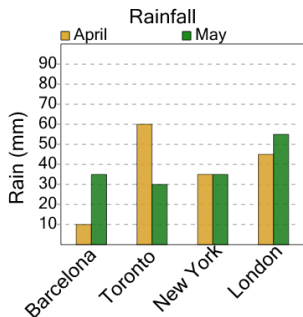
A Jane's / Sunday

B Frank's / Saturday

C Frank's / Monday

D Frank's / Tuesday

**5** What city had the LEAST amount of rain in a month?



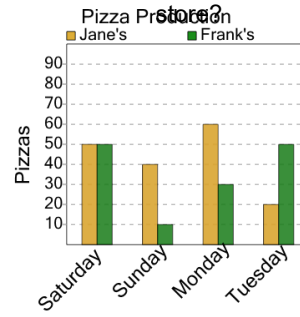
A April / Toronto

B April / Barcelona

C April / London

D May / New York

**6** On what day and store were the FEWEST pizzas made at any store?



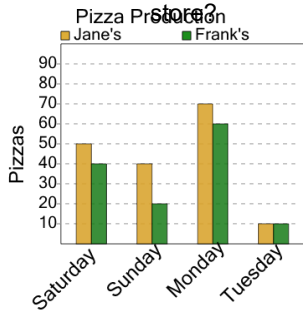
A Frank's / Monday

B Jane's / Saturday

C Jane's / Tuesday

D Frank's / Sunday

**7** On what day and store were the FEWEST pizzas made at any store?



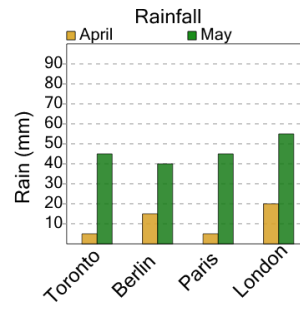
A Jane's / Tuesday

B Frank's / Saturday

C Jane's / Sunday

D Jane's / Monday

**8** What city had the LEAST amount of rain in a month?



A April / Paris

B May / Berlin

C April / Toronto

D May / London