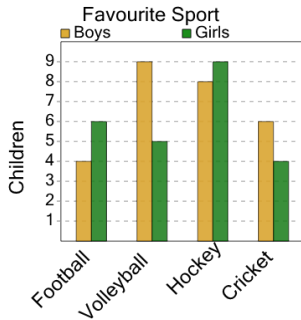




Graphing - Bar Graph (Double) - Read Category

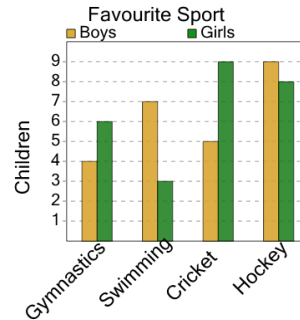
1 What sport do 6 girls like?



A Football B Hockey

C Cricket

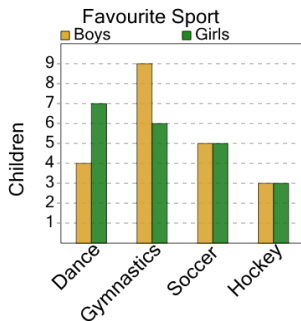
2 What sport do 9 boys like?



A Swimming B Cricket

C Hockey D Gymnastics

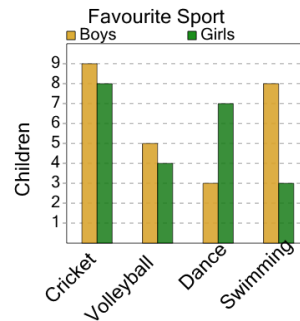
3 What sport do 4 boys like?



A Hockey B Dance

C Gymnastics

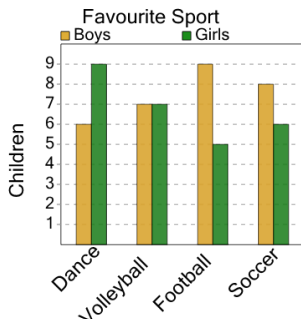
4 What sport do 5 boys like?



A Swimming B Volleyball

C Dance D Cricket

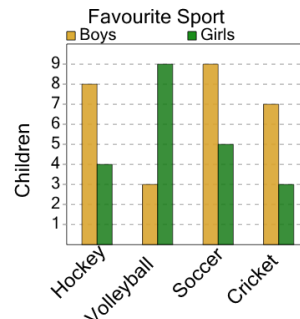
5 What sport do 6 boys like?



A Volleyball B Dance

C Soccer D Football

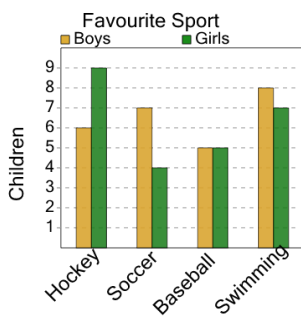
6 What sport do 7 boys like?



A Hockey B Soccer

C Cricket

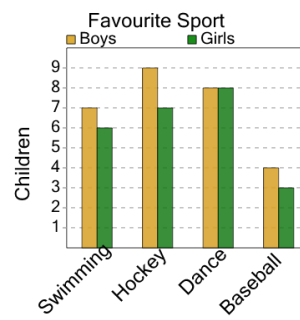
7 What sport do 6 boys like?



A Soccer B Baseball

C Swimming D Hockey

8 What sport do 4 boys like?



A Baseball B Hockey

C Dance D Swimming