


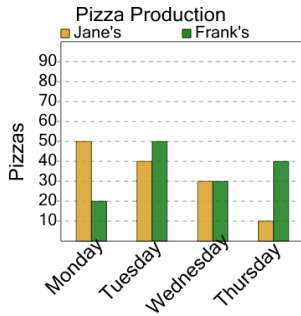


Graphing - Bar Graph (Double) - Read Category



1

On what day were 50 pizzas made at Jane's?



A

Wednesday

B

Thursday

C

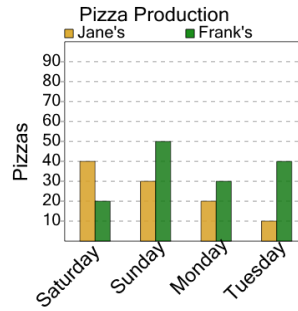
Monday

D

Tuesday

2

On what day were 30 pizzas made at Jane's?



A

Monday

B

Sunday

C

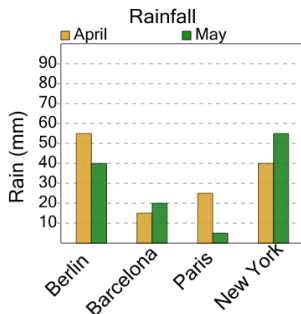
Tuesday

D

Saturday

3

What city had 25 millimeters of rain in April?



A

New York

B

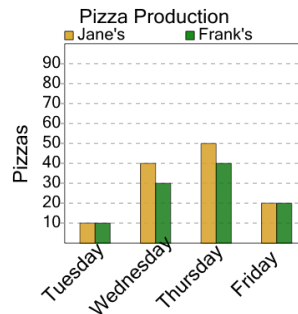
Paris

C

Berlin

4

On what day were 10 pizzas made at Frank's?



A

Tuesday

B

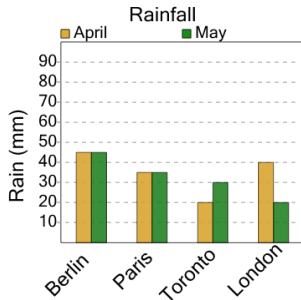
Thursday

C

Wednesday

5

What city had 45 millimeters of rain in May?



A

Berlin

B

Paris

C

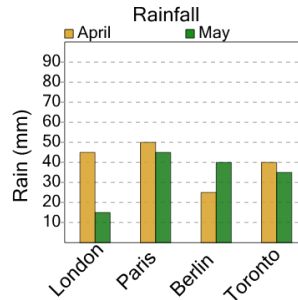
Toronto

D

London

6

What city had 40 millimeters of rain in April?



A

Paris

B

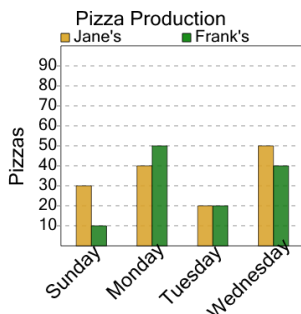
Toronto

C

London

7

On what day were 10 pizzas made at Frank's?



A

Tuesday

B

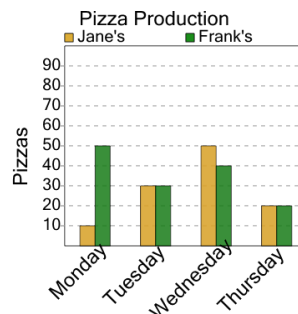
Sunday

C

Wednesday

8

On what day were 20 pizzas made at Frank's?



A

Tuesday

B

Monday

C

Wednesday

D

Thursday