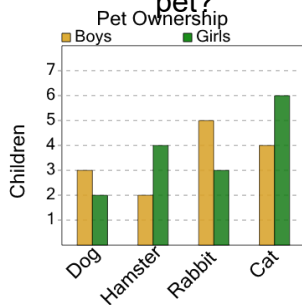


Graphing - Bar Graph (Double) - Read Value

1

How many boys have a cat as a pet?



A

3

B

1

C

6

D

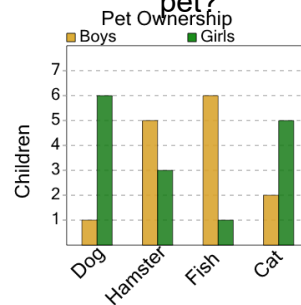
4

E

2

2

How many boys have a fish as a pet?



A

6

B

4

C

10

D

0

E

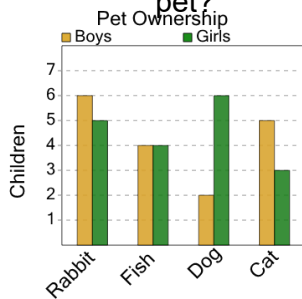
9

F

1

3

How many girls have a cat as a pet?



A

3

B

6

C

4

D

1

E

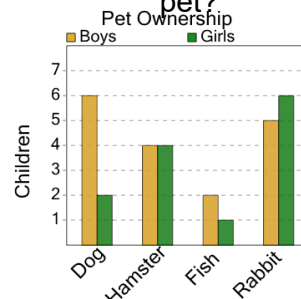
5

F

8

4

How many boys have a rabbit as a pet?



A

2

B

5

C

12

D

10

E

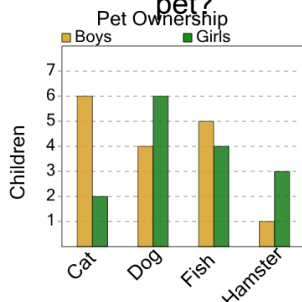
3

F

9

5

How many boys have a cat as a pet?



A

5

B

2

C

1

D

6

E

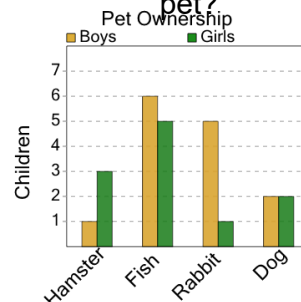
7

F

12

6

How many boys have a rabbit as a pet?



A

5

B

9

C

1

D

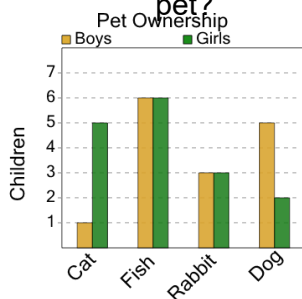
3

E

11

7

How many girls have a fish as a pet?



A

6

B

2

C

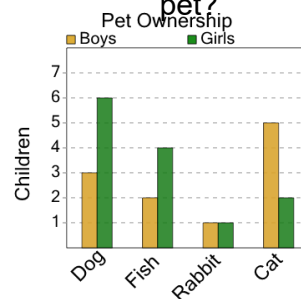
1

D

5

8

How many boys have a cat as a pet?



A

5

B

6

C

2

D

8

E

0

F

12