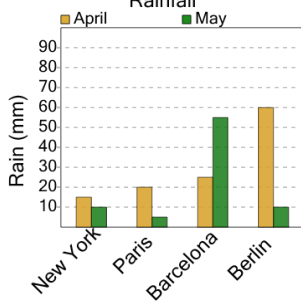




Graphing - Bar Graph (Double) - Total at Point

1

How much total rain was there in paris?



A

5

B

40

C

15

D

25

E

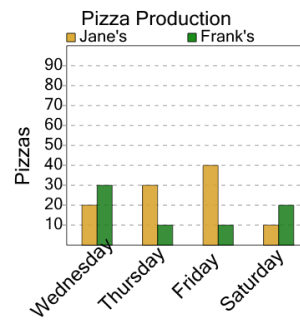
0

F

60

2

How many pizzas in total were made on thursday?



A

80

B

40

C

110

D

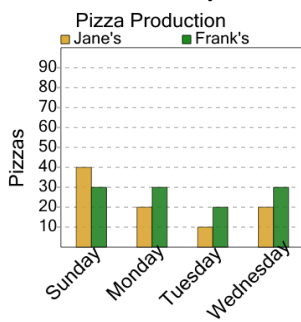
20

E

10

3

How many pizzas in total were made on tuesday?



A

30

B

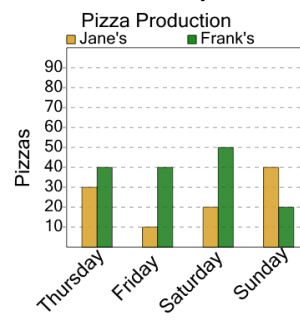
60

C

80

4

How many pizzas in total were made on friday?



A

10

B

70

C

50

D

120

E

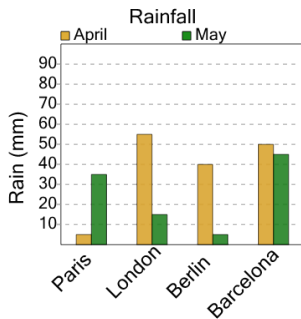
20

F

80

5

How much total rain was there in barcelona?



A

95

B

75

C

85

D

65

E

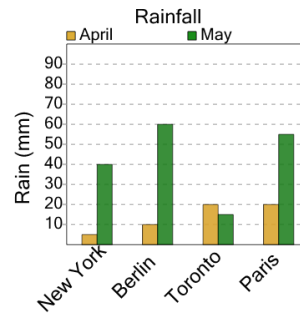
55

F

105

6

How much total rain was there in new york?



A

30

B

60

C

45

D

65

E

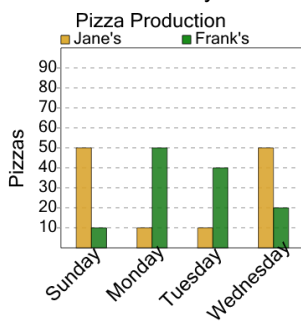
70

F

15

7

How many pizzas in total were made on sunday?



A

10

B

20

C

130

D

60

E

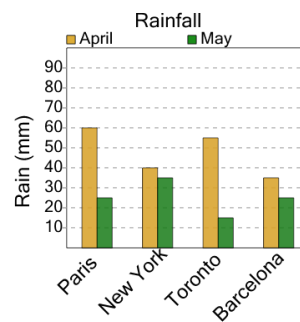
30

F

0

8

How much total rain was there in new york?



A

95

B

50

C

100

D

75

E

85