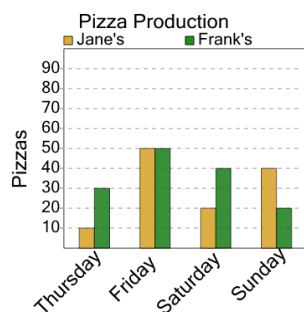




Graphing - Bar Graph (Double) - Total of Series

1

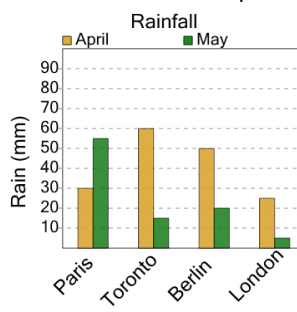
How many pizzas were made in total at Frank's?



A	B	C
110	90	140
D	E	F
180	170	120

2

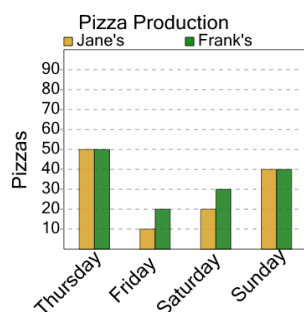
What was the total amount of rain measured in April?



A	B	C
165	155	135
D		
195		

3

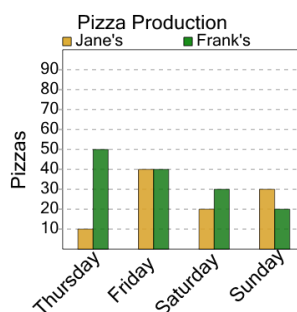
How many pizzas were made in total at Frank's?



A	B	C
180	140	70
D	E	
170	110	

4

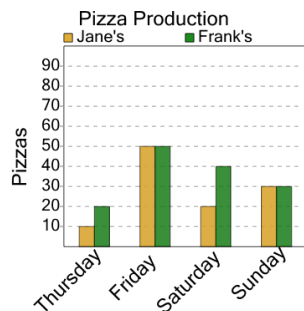
How many pizzas were made in total at Frank's?



A	B	C
90	200	120
D	E	F
190	180	140

5

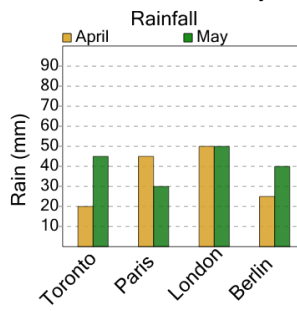
How many pizzas were made in total at Jane's?



A	B	C
150	140	180
D	E	
110	70	

6

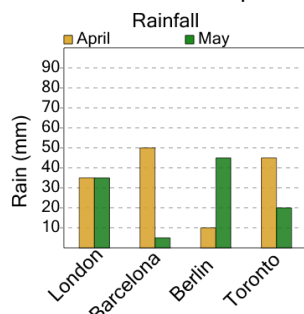
What was the total amount of rain measured in May?



A	B	C
175	165	185
D	E	
200	195	

7

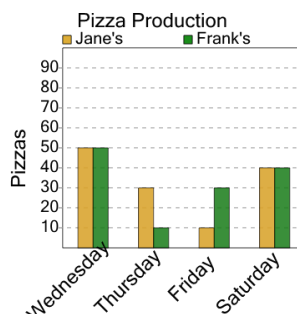
What was the total amount of rain measured in April?



A	B	C
170	120	130
D	E	
140	110	

8

How many pizzas were made in total at Frank's?



A	B	C
80	160	100
D	E	F
190	130	70