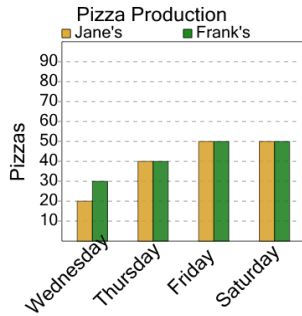


Graphing - Bar Graph (Double) - Which Two are Same

1

On what two days were the same number of pizzas made at Frank's?



A Saturday and Thursday

B Wednesday and Thursday

C Saturday and Wednesday

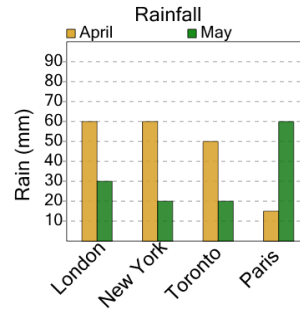
D Friday and Wednesday

E Friday and Saturday

F Wednesday and Saturday

2

In which two cities did the same amount of rain fall in April?



A New York and Paris

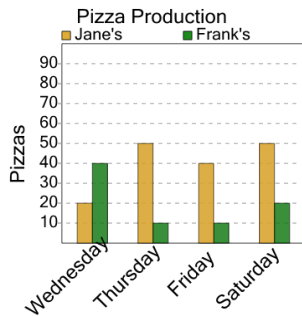
B London and Toronto

C London and New York

D Paris and London

3

On what two days were the same number of pizzas made at Frank's?



A Thursday and Wednesday

B Thursday and Friday

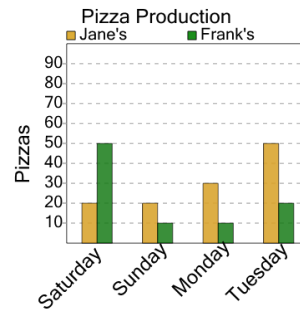
C Wednesday and Saturday

D Saturday and Thursday

E Saturday and Friday

4

On what two days were the same number of pizzas made at Jane's?



A Saturday and Tuesday

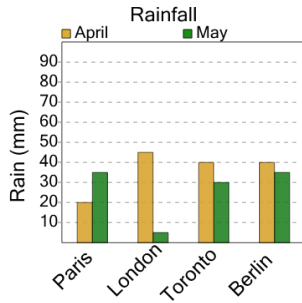
B Monday and Saturday

C Saturday and Sunday

D Sunday and Tuesday

5

In which two cities did the same amount of rain fall in May?



A Paris and Berlin

B London and Paris

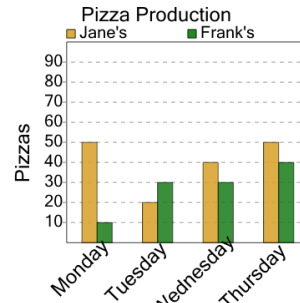
C Berlin and Toronto

D Paris and London

E London and Toronto

6

On what two days were the same number of pizzas made at Frank's?



A Wednesday and Thursday

B Monday and Tuesday

C Monday and Thursday

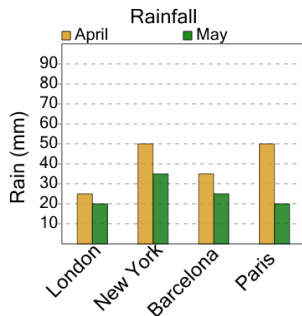
D Tuesday and Wednesday

E Thursday and Tuesday

F Tuesday and Thursday

7

In which two cities did the same amount of rain fall in May?



A Barcelona and New York

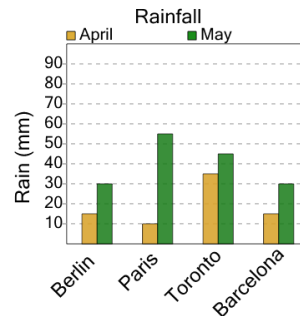
B Barcelona and London

C New York and Barcelona

D London and Paris

8

In which two cities did the same amount of rain fall in April?



A Toronto and Berlin

B Berlin and Toronto

C Berlin and Barcelona

D Barcelona and Paris

E Paris and Berlin

F Paris and Barcelona