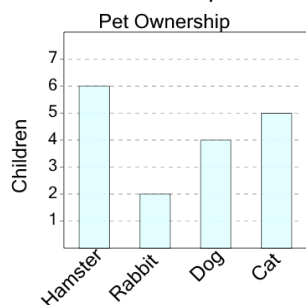




Graphing - Bar Graph (Single) - Difference of Two

1

How many more kids have a hamster than a cat as a pet?



A

8

B

6

C

1

D

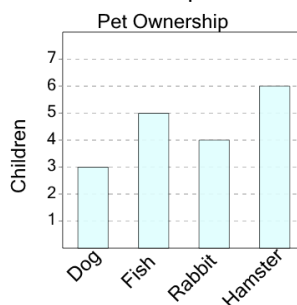
4

E

5

2

How many more kids have a fish than a dog as a pet?



A

4

B

0

C

6

D

7

E

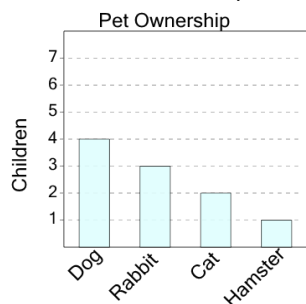
3

F

2

3

How many more kids have a cat than a hamster as a pet?



A

4

B

3

C

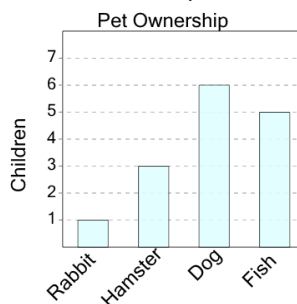
7

D

1

4

How many more kids have a fish than a rabbit as a pet?



A

8

B

2

C

4

D

10

E

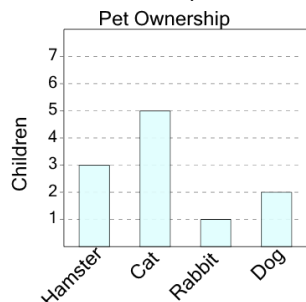
1

F

3

5

How many more kids have a cat than a rabbit as a pet?



A

10

B

7

C

2

D

6

E

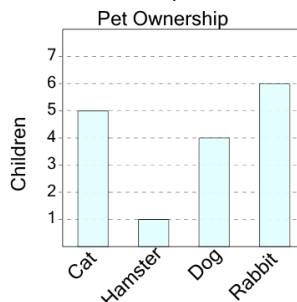
3

F

4

6

How many more kids have a cat than a dog as a pet?



A

5

B

2

C

0

D

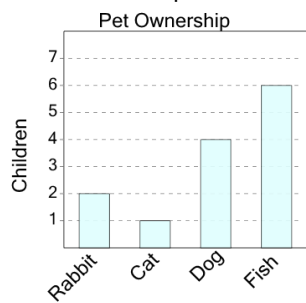
7

E

1

7

How many more kids have a dog than a cat as a pet?



A

2

B

7

C

9

D

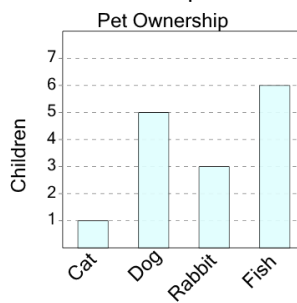
1

E

3

8

How many more kids have a fish than a rabbit as a pet?



A

4

B

3

C

5

D

2

E

6

F

1