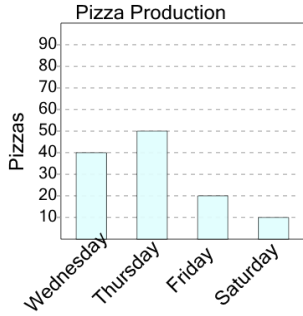


## Graphing - Bar Graph (Single) - Difference of Two

**1**

How many more pizzas were made on Thursday than on Saturday?



A

0

B

60

C

90

D

50

E

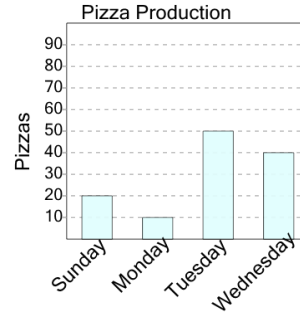
80

F

40

**2**

How many more pizzas were made on Sunday than on Monday?



A

10

B

20

C

80

D

30

E

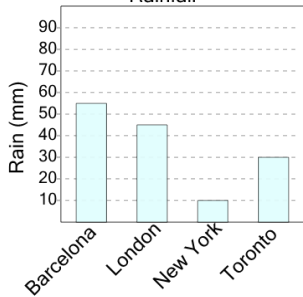
50

F

40

**3**

How many more millimeters of rain were there in London than in New York?



A

25

B

5

C

35

D

20

E

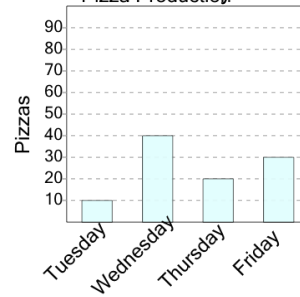
30

F

50

**4**

How many more pizzas were made on Wednesday than on Thursday?



A

60

B

50

C

20

D

0

E

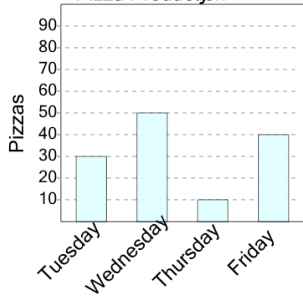
10

F

80

**5**

How many more pizzas were made on Wednesday than on Friday?



A

70

B

0

C

40

D

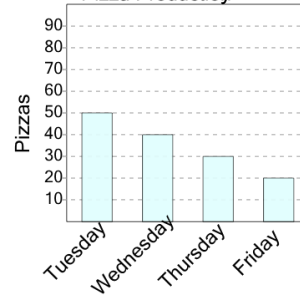
60

E

10

**6**

How many more pizzas were made on Wednesday than on Thursday?



A

40

B

50

C

10

D

0

E

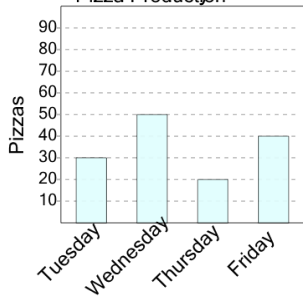
70

F

60

**7**

How many more pizzas were made on Wednesday than on Friday?



A

10

B

30

C

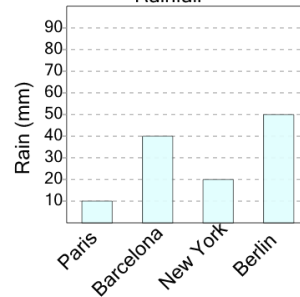
60

D

70

**8**

How many more millimeters of rain were there in Barcelona than in New York?



A

45

B

20

C

30

D

10

E

5

F

15