
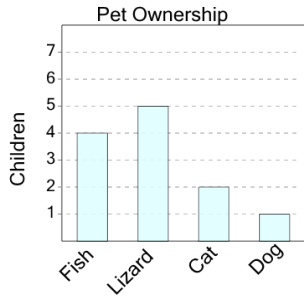




## Graphing - Bar Graph (Single) - Maximum

**1**

What pet do the largest number of children have?



A

Fish

B

Dog

C

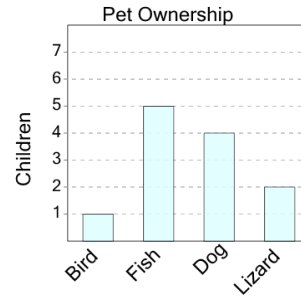
Cat

D

Lizard

**2**

What pet do the largest number of children have?



A

Bird

B

Fish

C

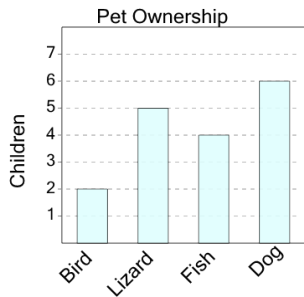
Dog

D

Lizard

**3**

What pet do the largest number of children have?



A

Dog

B

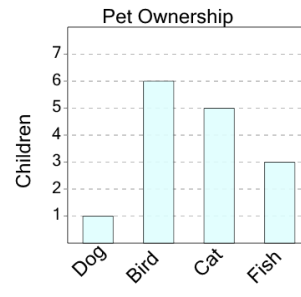
Bird

C

Fish

**4**

What pet do the largest number of children have?



A

Cat

B

Fish

C

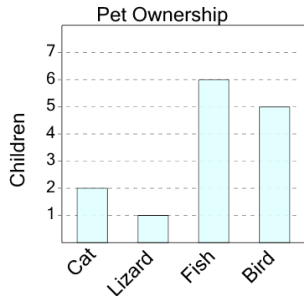
Dog

D

Bird

**5**

What pet do the largest number of children have?



A

Fish

B

Lizard

C

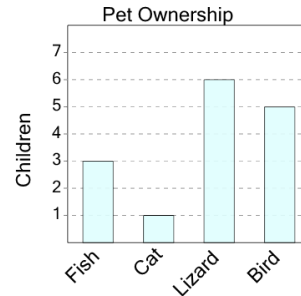
Cat

D

Bird

**6**

What pet do the largest number of children have?



A

Cat

B

Fish

C

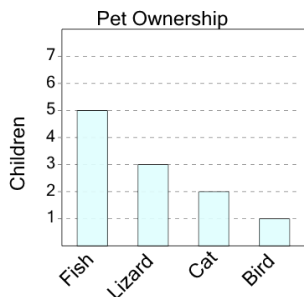
Lizard

D

Bird

**7**

What pet do the largest number of children have?



A

Fish

B

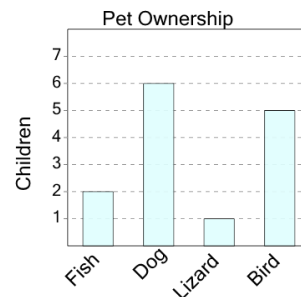
Lizard

C

Cat

**8**

What pet do the largest number of children have?



A

Fish

B

Dog

C

Lizard

D

Bird