


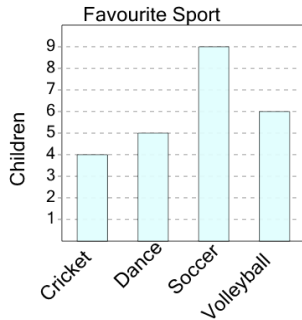


Graphing - Bar Graph (Single) - Maximum



1

What sport do the largest number of children like most?



A

Soccer

B

Cricket

C

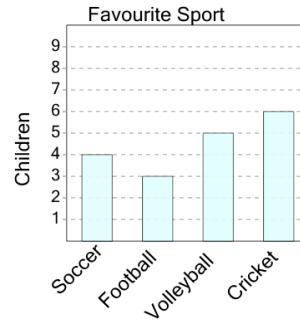
Volleyball

D

Dance

2

What sport do the largest number of children like most?



A

Volleyball

B

Football

C

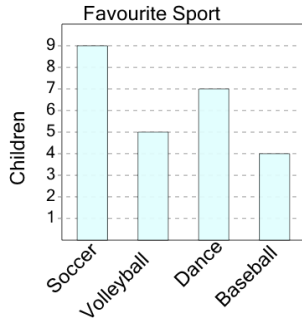
Soccer

D

Cricket

3

What sport do the largest number of children like most?



A

Baseball

B

Volleyball

C

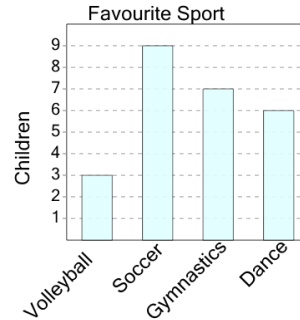
Soccer

D

Dance

4

What sport do the largest number of children like most?



A

Dance

B

Gymnastics

C

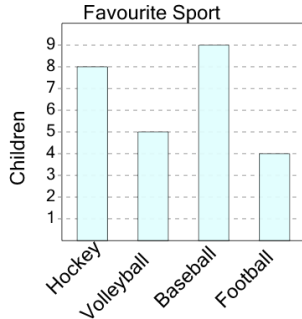
Soccer

D

Volleyball

5

What sport do the largest number of children like most?



A

Volleyball

B

Football

C

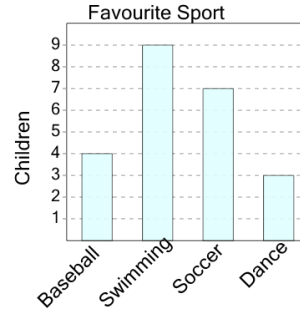
Baseball

D

Hockey

6

What sport do the largest number of children like most?



A

Soccer

B

Swimming

C

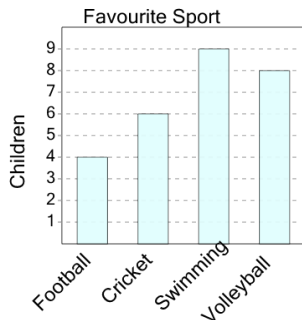
Dance

D

Baseball

7

What sport do the largest number of children like most?



A

Volleyball

B

Cricket

C

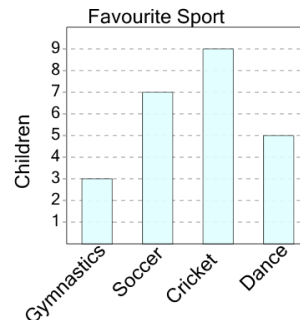
Swimming

D

Football

8

What sport do the largest number of children like most?



A

Dance

B

Gymnastics

C

Cricket