
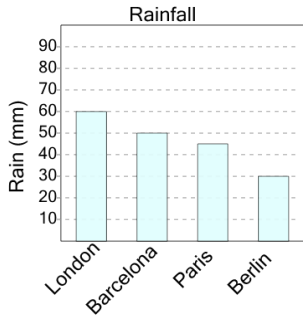




Graphing - Bar Graph (Single) - Maximum

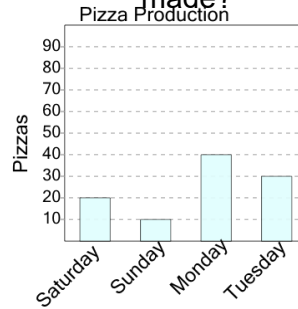


1 What city had the largest amount of rain?



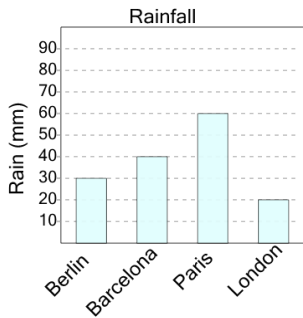
A London	B Paris
C Barcelona	D Berlin

2 On what day were the most pizzas made?



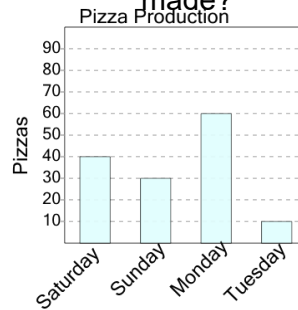
A Saturday	B Tuesday
C Monday	D Sunday

3 What city had the largest amount of rain?



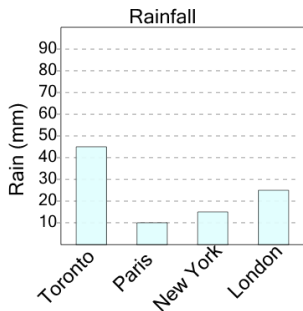
A London	B Paris
C Barcelona	D Berlin

4 On what day were the most pizzas made?



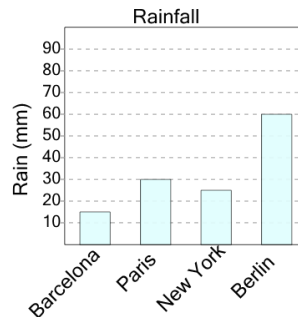
A Monday	B Sunday
C Tuesday	

5 What city had the largest amount of rain?



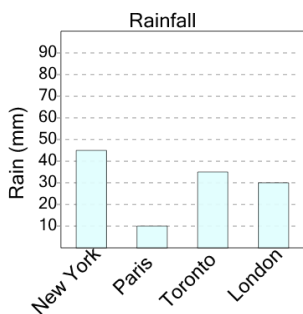
A London	B New York
C Toronto	

6 What city had the largest amount of rain?



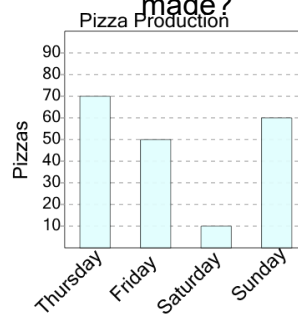
A Barcelona	B New York
C Berlin	

7 What city had the largest amount of rain?



A Toronto	B London
C New York	

8 On what day were the most pizzas made?



A Thursday	B Friday
C Sunday	D Saturday