



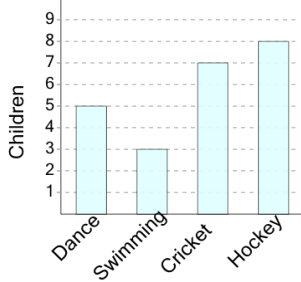
Graphing - Bar Graph (Single) - Minimum



1

What sport do the smallest number of children like most?

Favourite Sport



A

Hockey

B

Swimming

C

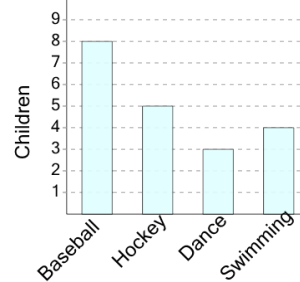
Dance

D

2

What sport do the smallest number of children like most?

Favourite Sport



A

Dance

B

Swimming

C

Hockey

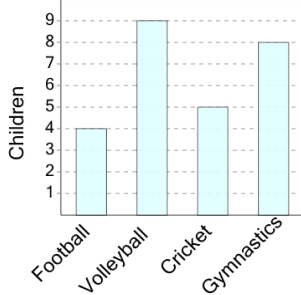
D

Baseball

3

What sport do the smallest number of children like most?

Favourite Sport



A

Football

B

Volleyball

C

Gymnastics

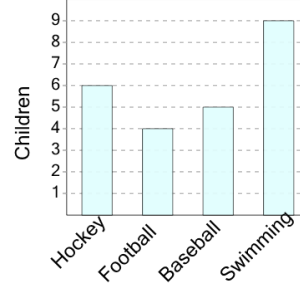
D

Cricket

4

What sport do the smallest number of children like most?

Favourite Sport



A

Baseball

B

Football

C

Swimming

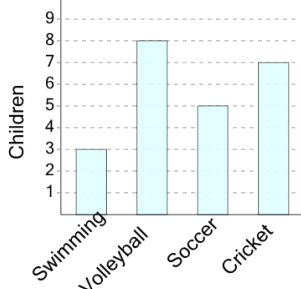
D

Hockey

5

What sport do the smallest number of children like most?

Favourite Sport



A

Cricket

B

Soccer

C

Volleyball

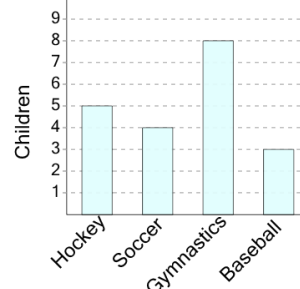
D

Swimming

6

What sport do the smallest number of children like most?

Favourite Sport



A

Soccer

B

Baseball

C

Gymnastics

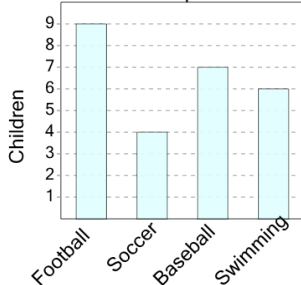
D

Hockey

7

What sport do the smallest number of children like most?

Favourite Sport



A

Swimming

B

Football

C

Soccer

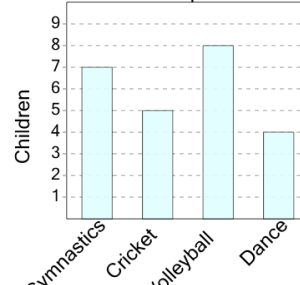
D

Baseball

8

What sport do the smallest number of children like most?

Favourite Sport



A

Dance

B

Cricket

C

Volleyball

D

Gymnastics