


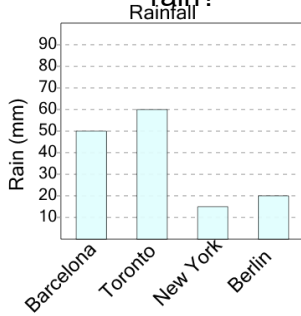


Graphing - Bar Graph (Single) - Minimum



1

What city had the least amount of rain?



A

Berlin

B

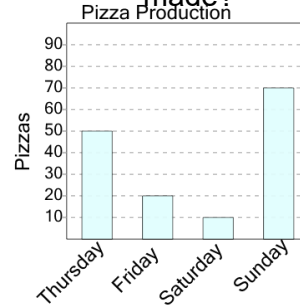
Barcelona

C

New York

2

On what day were the fewest pizzas made?



A

Sunday

B

Thursday

C

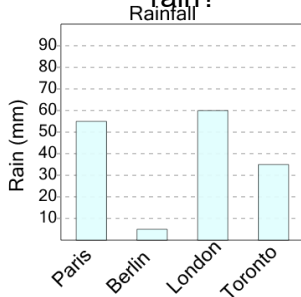
Saturday

D

Friday

3

What city had the least amount of rain?



A

Berlin

B

Toronto

C

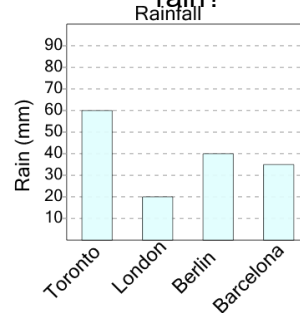
Paris

D

London

4

What city had the least amount of rain?



A

Barcelona

B

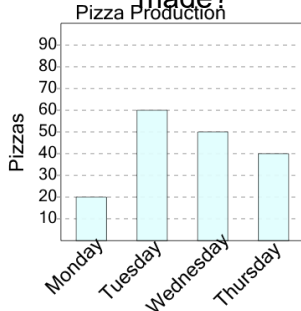
Berlin

C

London

5

On what day were the fewest pizzas made?



A

Tuesday

B

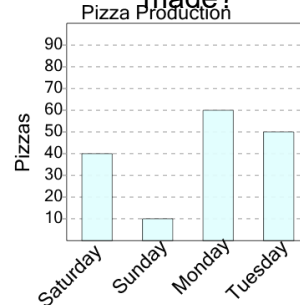
Thursday

C

Monday

6

On what day were the fewest pizzas made?



A

Monday

B

Saturday

C

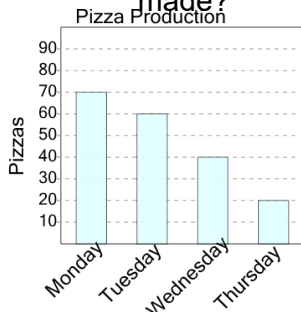
Tuesday

D

Sunday

7

On what day were the fewest pizzas made?



A

Wednesday

B

Tuesday

C

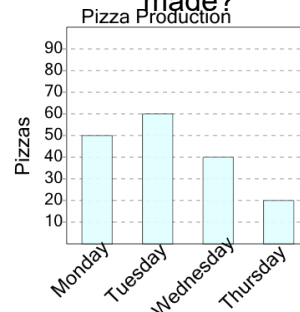
Thursday

D

Monday

8

On what day were the fewest pizzas made?



A

Wednesday

B

Thursday

C

Tuesday

D

Monday