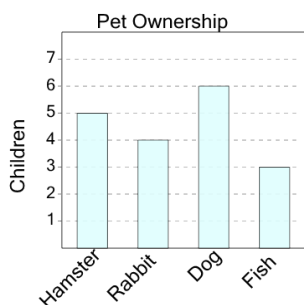




Graphing - Bar Graph (Single) - Read Category

1

What pet do 5 children have?



A

Dog

B

Hamster

C

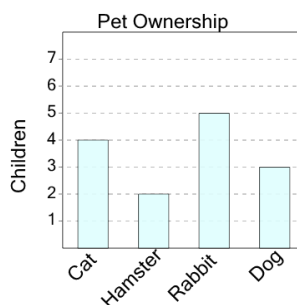
Fish

D

Rabbit

2

What pet do 2 children have?



A

Hamster

B

Cat

C

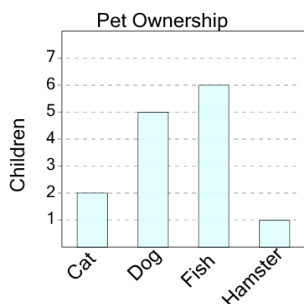
Dog

D

Rabbit

3

What pet do 1 children have?



A

Fish

B

Hamster

C

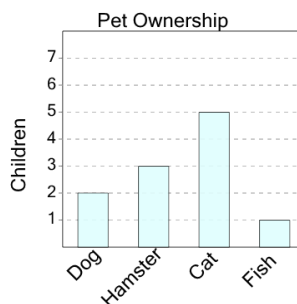
Cat

D

Dog

4

What pet do 1 children have?



A

Cat

B

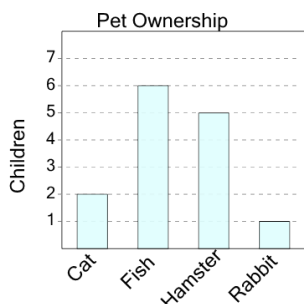
Fish

C

Dog

5

What pet do 1 children have?



A

Rabbit

B

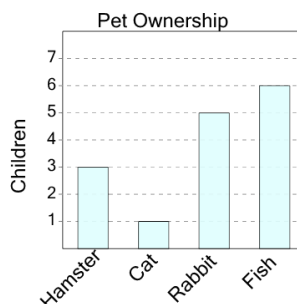
Cat

C

Fish

6

What pet do 6 children have?



A

Hamster

B

Cat

C

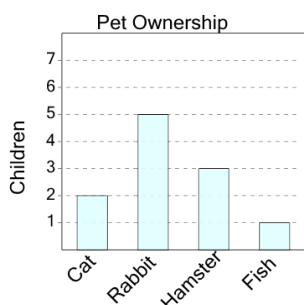
Fish

D

Rabbit

7

What pet do 2 children have?



A

Hamster

B

Fish

C

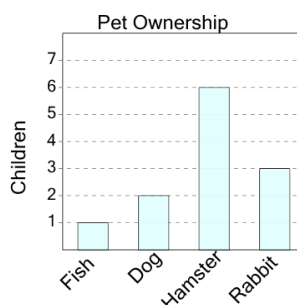
Rabbit

D

Cat

8

What pet do 3 children have?



A

Rabbit

B

Hamster

C

Dog

D

Fish